

St. PBN PUBLIC SCHOOL, GURUGRAM  
UT- I EXAMINATION  
SAMPLE PAPER  
Class – UKG  
Subject- ENGLISH

Time: 2 hours

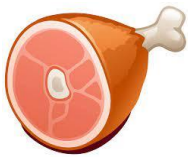
MM-35

Name - \_\_\_\_\_

Roll no. - \_\_\_\_\_

1. Look at the picture and write the word:

(6)



\_\_\_\_\_



\_\_\_\_\_



\_\_\_\_\_



\_\_\_\_\_



\_\_\_\_\_



\_\_\_\_\_

2. Fill in the missing letters:

(5)

• T \_\_\_ V \_\_\_

• X \_\_\_ \_\_\_

• n \_\_\_ p \_\_\_

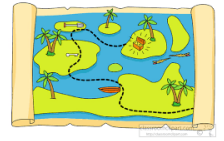
• \_\_\_ s \_\_\_ u

• K \_\_\_ M \_\_\_ O


3. Match the words with correct pictures :

(6)

Way



Map




Jam



Pan



Bag



Bat



4. Circle the correct word:

(4)



bad

dad

lad



pat

cat

rat



lap

gap

tap



mag

sag

tag

5. Write the following letters of alphabet in cursive:

(4)

- Cc \_\_\_\_\_
- Gg \_\_\_\_\_
- Ee \_\_\_\_\_
- Dd \_\_\_\_\_

6. Write one rhyming word:

(6)

- a) Sat \_\_\_\_\_
- b) lag \_\_\_\_\_
- c) Nap \_\_\_\_\_
- d) Max \_\_\_\_\_
- e) Day \_\_\_\_\_
- f) Mad \_\_\_\_\_

7. Dictation:

(4)

1. \_\_\_\_\_
2. \_\_\_\_\_
3. \_\_\_\_\_
4. \_\_\_\_\_

सेंट. पी. बी. एन. पब्लिक स्कूल

SAMPLE PAPER UT-I

कक्षा : UKG

विषय : हिंदी

2024-25

समय : 2 घंटे

अंक : 35











NAME: \_\_\_\_\_ ROLL NO \_\_\_\_\_

सामान्य निर्देश :

- 1 सभी प्रश्नों के उत्तर देना अनिवार्य है।
- 2 लेख और वर्तनी का ध्यान रखें।
- 3 प्रश्नों को ध्यान से पढ़कर उत्तर दीजिए।

1. चित्र देखकर अक्षर लिखिए।

(1x10=10)

				
_____	_____	_____	_____	_____
				
_____	_____	_____	_____	_____

2. खाली स्थान भरिए ।

(1x5=5)

(i) क \_\_\_\_\_ ग \_\_\_\_\_ ड

(ii) औ \_\_\_\_\_

(iii) ट \_\_\_\_\_ ड \_\_\_\_\_ ण

(iv) \_\_\_\_\_ आ \_\_\_\_\_ ई

(v) ऋ \_\_\_\_\_ ऐ \_\_\_\_\_

3. चित्र देखकर सही अक्षर पर गोला लगाइए ।

(1x6=6)



आ अ ऊ इ



अ आ इ ई



उ ऊ इ ई



आ उ ए उ



उ अ ऊ ई



ऊ अ आ औ

4. चित्र पहचानकर सही मिलान करिए ।

(1x5=5)

च

क

ग

ड

ठ



5. भिन्न अक्षर पर गोला लगाओ।

(1x3=3)

ऐ	अः	ऐ	ऐ
ग	ग	ज	ग
ख	ख	ख	इ

6. श्रुतलेख।

(1x6=6)

1. \_\_\_\_\_

2. \_\_\_\_\_

3. \_\_\_\_\_

4. \_\_\_\_\_

5. \_\_\_\_\_

6. \_\_\_\_\_

**St. PBN PUBLIC SCHOOL, GURUGRAM**  
**UT- I EXAMINATION**  
**SAMPLE PAPER**  
**Class – UKG**  
**Subject- MATHS**

**Time: 2 hours**

**M.M-35**

**1. Complete counting 1-50.**

**(10)**

T	O	T	O	T	O	T	O	T	O
	1	1	1			3	1	4	1
	2			2	2				
						3	3		
		1	4					4	4
	5					3	5		
				2	6				
								4	7
		1	8					4	8



	9			2	9				
		2	0			4	0		

2. What comes after?

(5)

1. 19 \_\_\_\_\_

2. 0 \_\_\_\_\_

3. 34 \_\_\_\_\_

4. 48 \_\_\_\_\_

5. 12 \_\_\_\_\_

6. 26 \_\_\_\_\_

7. 23 \_\_\_\_\_

8. 41 \_\_\_\_\_

9. 35 \_\_\_\_\_

10. 26 \_\_\_\_\_

3. What comes between?

(5)

1. 2 \_\_\_ 2

2. 19 \_\_\_ 21

3. 48 \_\_\_ 50

4. 11 \_\_\_ 13

5. 24 \_\_\_ 26

6. 17 \_\_\_ 19

7. 32 \_\_\_ 34

8. 43 \_\_\_ 45

9.  $5 \underline{\quad} 7$

10.  $26 \underline{\quad} 28$

4. Complete reverse counting 20-1.

(5)

T	O	T	O
		1	0
1	9		
			7
1	6		
			4
1	3		
			1

5. Fill in the missing numbers:

(5)

1.  $42, \underline{\quad}, \underline{\quad}, 45$

2.  $38, \underline{\quad}, \underline{\quad}$

3.  $\underline{\quad}, \underline{\quad}, 18$





4.  $\underline{\quad}, 29, \underline{\quad}$

5.  $\underline{\quad}, \underline{\quad}, 3$




6. Pre- Number concept:

(5)

1. Which is the smallest ball?




2. Which girl is happy?

3. What runs DOWN on road?

4. Which pencil is tallest?

5. In which picture monkey is at bottom of the tree



6. Which is the smallest tree?



7. Which boy is crying?



8. Which girls is up on slide?





9. Which comb is the shortest?



10. Which mouse is at the top of chair?



**St. PBN PUBLIC SCHOOL, GURUGRAM**  
**UT- I EXAMINATION**  
**SAMPLE PAPER**  
**Class – UKG**  
**Subject- EVS**

**Time: 2 hours**

**MM-35**

**1. Draw shapes with following colors:**

**(10)**

<b>Circle - RED</b>	<b>Square - GREEN</b>
<b>Rectangle - BLACK</b>	<b>Triangle- BLUE</b>
<b>Diamond - PINK</b>	

2. Fill in the missing letters of birds and vehicles:

(5)

1. B \_ \_ \_

2. S \_ \_ \_ N

3. C \_ \_ \_

4. C O \_ \_ \_

5. B \_ \_ \_ T

3. Look at the picture and name them:

(5)



\_\_\_\_\_



\_\_\_\_\_



\_\_\_\_\_



shutterstock.com - 477265758

\_\_\_\_\_




\_\_\_\_\_

4. Circle the correct homes and animals that belongs to each other :

(1x8=8)



=




=



=







=



=



=



=



=



5. Match the following:

(1x7=7)

