

St. PBN PUBLIC SCHOOL
UNIT TEST- I
CLASS - I
SUBJECT - ENGLISH
SAMPLE PAPER

TIME: 2 Hours

MM: 40

NAME: _____

ROLL NO: _____

GENERAL INSTRUCTIONS:

1. All questions are compulsory.
2. Read each question carefully.

SECTION-A

Q1) Answer the following questions.

(1x4=4)

a) Where is Aarav?

Aarav is _____

b) What is the name of Aarav's teacher?

The name of Aarav's teacher is _____

c) At what time does the school start in the poem?

The school starts at _____

d) Write three things you do at school?

I like to _____

Q2) Fill in the blanks.

(1x3=3)

Counting	eraser	Red
----------	--------	-----

- i) The colour of Aarav's bag is _____.
- ii) Children do _____ at school.
- iii) Aarav has a white _____.

Q3) Write Yes or No.

(0.5X6=3)

- a) Aarav is in his classroom.
- b) Aarav has a red ruler.
- c) School is not fun.
- d) School starts at twelve.
- e) The children go home after school.
- f) Aarav loves his classroom.

SECTION-B

Q4) Circle the names of places.

(1x5=5)

teacher	eraser	Classroom	Book
Fire station	photo	Television	Door
blanket	school	Phone	plug
Bag	tiger	Fish	Bank
Medicines	table	Hospital	Ring

Q5) Identify and writenames of the following pictures.

(1x5=5)



shutterstock.com · 1930215425





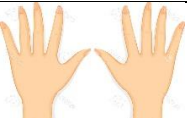










Q6) Identify and circle the correct one.

(1x7=7)

 a) dog b) dogs	 a) bottles b) bottle
 a) hands b) hand	 a) cow b) cows
 a) duck b) ducks	 a) light b) lights
 a) houses b) house	

Q7) Match the following with their opposite gender.

(1x5=5)

Father	Mare
Horse	Mother
Lion	Duck
Tiger	Lioness
drake	Tigress

Q8) Fill in the blanks with and/but.

(1x5=5)

a) Leena ___ Reena are sisters.

b) My brother is short ___ I am tall.

c) My mother bought fruits ___ vegetables.

d) I have so many pencils ___ erasers.

e) I want to play outside ___ it is raining.

Q9) Write five lines on My Self.

(3)

सेंट. पी. बी. एन. पब्लिक स्कूल

SAMPLE PAPER UT-I

कक्षा : पहली

विषय : हिंदी

2024-25

समय : 2 घंटे

अंक : 40

NAME: _____ ROLL NO _____

सामान्य निर्देश :

- 1 सभी प्रश्नों के उत्तर देना अनिवार्य है।
- 2 लेख और वर्तनी का ध्यान रखें।
- 3 प्रश्नों को ध्यान से पढ़कर उत्तर दीजिए।

प्रश्न 1. चित्र देखकर पहला वर्ण लिखिए।

(1x5=5)



(i) _____



(ii) _____



(iii) _____



(iv) _____



(v) _____

(ड) _____

प्रश्न 6. दिए गए शब्दों में सही जगह पर उ' की मात्रा लगाइए। (1×5=5)

(क) जामन _____ (ख) मरगा _____

(ग) करता _____ (घ) दातन _____

(ड) जराब _____

प्रश्न 7. चित्र को देखकर शब्द पूरा कीजिए।

(1×5=5)



(i) ___ ल



(ii) तरा ___



(iii) ख ___ र



(iv) ___ न



(v) तर ___ ज

प्रश्न 8. पाँच फलों के नाम लिखिए।

(1×5=5)

(क) _____

(ख) _____

(ग) _____

(घ) _____

(ड) _____

(च) _____

St. PBN PUBLIC SCHOOL, GURUGRAM
UNIT TEST- I
CLASS - I
SUBJECT – MATHEMATICS
SAMPLE PAPER

MM-50

Time: 2 hour

General instructions-

1. All questions are compulsory.
2. Read each question carefully.

NAME _____ ROLL NO _____


I. TICK THE CORRECT OPTION.

(1x10=10)

1. Choose the picture in which ball is in front of the box?



2. Tick the picture in which boy is on top of the stairs?



3. 9 and 1 more=

- (a) 11
(b) 10

4. Which is the smaller number?

- a) 3

b) 5

5. The number name of 1:

a) five


b) One

6. Zero means:

a) nothing

b) next number

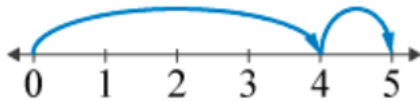
7. Elephant is on _____ position:



a) Fourth

b) First

8. Choose the correct option:



a) $3+0=3$

b) $4+ 1=5$

9. What comes before 5?

a) 4

b) 6

10. Rat is sitting _____ the box?



a) inside

b) outside

II. Write the answers as instructed.

1. Write the number names of the following: (4)

(a) 11 = _____

(b) 30 = _____

(c) 10 = _____

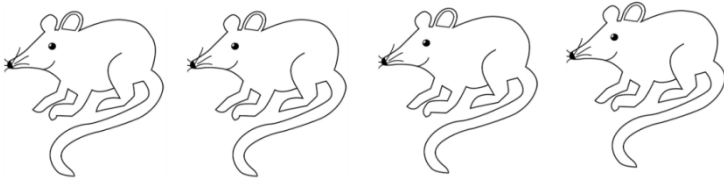
(d) 16 = _____

2. Write the missing numbers (2)

(i) 34, _____, 36, _____, 38, 39.

(ii) 12, _____, 16, _____, 20.

3. Shade the third rat: (1)



III. Complete the table. (3)

a) $2 \times 3 =$ _____

b) $2 \times 8 =$ _____

c) $2 \times 9 =$ _____

IV. Match the following. (1x5=5)

(i) 



(ii) square

2

(iii) $0+4$ 21

(iv) After 20 comes 11 and 13

(v) 12 comes between 4


V. Solve the following questions:


(2x5=10)

1. Complete the following.

15, __, 13, __, 11, __, 9, __, 7, 6

2. How many sides are there in :

a)  = _____

b)  = _____

3. State True or False:

a) Shape of pizza slice is triangle. _____

b) Shape of coin is square. _____

4. Arrange the given numbers from bigger to smaller:

a) 21, 19, 43 _____

b) 8, 6, 7 _____

5. Fill in the blank <, > or = :

a) 12 _____ 28

b) $81 \underline{\quad} 34$

VI. Word problems

(2x3=6)

1. Seema had 8 Orange balls ,her brother gave her 0 purple balls.how many balls does seema have in all?

Ans. $\underline{\quad} + \underline{\quad} = \underline{\quad}$ balls

2. I am a shape with no corners. I am round like a wheel, and you can roll me.

Ans: (i)Who am I $\underline{\quad}$

(ii)spell me $\underline{\quad}$

3. Ruhi had 6 red Marbles 4 Black Marbles. how many Marbles are in total?

Ans- No. of red marbles= $\underline{\quad}$ No. of black marbles= $\underline{\quad}$

Total no. of marbles= $\underline{\quad}$

Q7.Fill in the blanks-

(1x5=5)

a) $4+4=$ $\underline{\quad}$

b) $2 \times 2 =$ $\underline{\quad}$.

c) $\underline{\quad}$ just comes before 1.

d) $3+2=$ $\underline{\quad}$ (vefi)

e)  $+ =$ $\underline{\quad}$

Q8: Case Study :

(1x4=4)

Sia and her friends decided to celebrate her birthday with the children living in orphanage. Her mother prepared 4 cakes and 5 pies ,Her brother bought 2 more cakes.

(i) Add the number of items made by mother?

(ii) Who bought less cake?

(iii) How many cakes her mother made for her?

(iv) How many cakes are in total?

a) parents

b) uncle

(x) The part of our body from shoulders to fingers_____ .

a) shoulders

b) arm

2. Answer the following questions

(2x3=6)

(i) Name two types of families?

Ans: _____

(ii) Write two lines about minnie.

Ans: _____

(iii) Name two things that a house protect us from?

Ans: _____

3. Match the following:

(1x5=5)

(i) Grandmother and Grandfather

(i) cold

(ii) winter

(ii) Grandparents

(iii) balcony

(iii) open space in house

(iv) cry

(iv) bathe

(v) bathroom

(v) weep

4. Complete the word:

(1x5=5)

a) T__ __th

b) F__th__r

c) D__ __cing

d) Bedr__ __ m

e) Nu__ __ear

5. Write true or false:

(1x5=5)

a) Our body is made up of many parts. _____

b) Jillie live in birdhouse. _____

- c) We have six sense organs. _____
- d) A house keeps us safe. _____
- e) Houses built on mountains have flat roofs. _____

6. Name the following:

(1x5=5)

- a) We eat our meals in _____
- b) One or more children live with either their mother or father _____
- c) The part of your body that you use to clap _____
- d) We have different likes and _____
- e) A son or a daughter of our uncle or aunt _____.

7. Case Study:

(1x4=4)

Anya went for a walk in the park. She saw bright flowers of all colours and listened to the cheerful songs of the birds in the trees. As she walked, she smelled the sweet fragrance of the blooming roses and tasted the ice-cream from a cart. Anya took off her shoes to feel the soft, cool grass beneath her feet. She was delighted by all the wonderful sights.

1. Which body part of Anya helped her to walk?
2. Name of any sense organ used in this paragraph.
3. Which sense organ Anya used to taste the ice-cream?
4. Draw the eyes with which Anya saw all the sights.

St. PBN PUBLIC SCHOOL, GURUGRAM
UNIT TEST- I
CLASS - I
SUBJECT – COMPUTER
SAMPLE PAPER

TIME: 2 Hours

MM: 20

GENERAL INSTRUCTIONS:

1. All questions are compulsory.
2. Read each question carefully.

NAME: _____

ROLL NO: _____

1. Tick the correct answer.

(0.5x5=2.5)

- a) A computer works very _____.
- i. Fast ii. Slow iii. Medium
- b) Robot helps us to do _____.
- i. Household work ii. Travelling iii. Shopping
- c) Computer is used to draw _____.
- i. Pictures ii. Songs iii. Movies
- d) _____ does not run on electricity.
- i. Washing Machine ii. Microwave iii. Clock
- e) A _____ is an example of AI.
- i. Robot ii. Microwave iii. juicer

2. Fill in the blanks:

(0.5x5=2.5)

(listen, Monitor, Data, Cooler, letters)

- a) We can type _____ in computer.
- b) _____ looks like a TV screen.
- c) A computer helps to _____ songs.
- d) A computer never forgets _____.

e) _____ keeps our home cool.

3. Tick (√) for correct and (X) for incorrect.

(1x5=5)

a) A Computer is a machine.

b) Machines are manmade.

c) We use refrigerator to keep veggies fresh.

d) Computers are used to play games.

e) Drone can help us to do household work.

4. Answer the following questions in one word:

(1x4=4)

a) Which machine bake cakes and cookies?

b) Name the machine that is used to travel.

c) Which machine is used to send and receive e-mails?

d) Name any one place where we use computers.

5. Complete the missing letters-

(0.5x5=2.5)

a) Mix_____r

b) F_____n

c) Toas_____er

d) Ale_____a

e) Tab____et

6. Case study based questions-

(0.5X7=3.5)

a. Match the following machine with their name-

Machine Name

Clock

Computer

Juicer

Sandwich maker

Mobile

Laptop

Aeroplane

Machine



