

**St. PBN PUBLIC SCHOOL**  
**UNIT TEST-II**  
**CLASS-I**  
**ENGLISH**  
**SAMPLE PAPER**

TIME: 2 Hours

M.M- 40

NAME: \_\_\_\_\_

ROLL NO: \_\_\_\_\_

**GENERAL INSTRUCTIONS:**

1. All questions are compulsory.
2. Read each question carefully.

**Section (A)**

**Q1) Answer the following questions.**

**(1x4=4)**

a) Who won the race?

---

---

b) Who is Raju?

---

---

c) What name was given to the scarecrow?

---

---

d) Who says the moral of the story?

---

---

**Q2) Fill in the blanks.**

**(1x5=5)**

<b>Wins</b>	<b>magic</b>	<b>Crop</b>
<b>Cheer</b>	<b>Wise owl</b>	

- a) Raju says that we have a \_\_\_\_\_ scarecrow.
- b) Scarecrow saves the \_\_\_\_\_.
- c) All the animals gather to \_\_\_\_\_ the hare and tortoise.
- d) The \_\_\_\_\_ said that hare is not the fastest.
- e) Slow and steady \_\_\_\_\_ the race.

**Q3) Write Yes or No.**

**(1x6=6)**

- a) Raju saw Bhiju can walk and fly. \_\_\_\_\_
- b) A scarecrow helps sacre all the birds. \_\_\_\_\_
- c) The elephant can run fast. \_\_\_\_\_
- d) The hare wins the race. \_\_\_\_\_
- e) The tortoise walks fast. \_\_\_\_\_
- f) The hare was boasting to the animals. \_\_\_\_\_

**SECTION (B)**

**Q4) Circle the describing words.**

**(1x7=7)**

- a) I lost my new ring.
- b) Cheetah is a fast runner.
- c) Ben has three pencils.
- d) Diya is a nice girl.
- e) There is a big elephant.
- f) My cat has a short tail.
- g) Apple is red in colour.

**Q5) Fill in the blanks with a, an, the.**

**(0.5x6=3)**








- a) There is \_\_\_\_\_ ball.
- b) I saw \_\_\_\_\_ eagle.
- c) She has \_\_\_\_\_ car.

- d) \_\_\_\_\_ sun is shining.
- e) \_\_\_\_\_ birds are sitting on the tree.
- f) \_\_\_\_\_ apple a day keeps the doctor away.

Q6) Fill in the blanks with this, these, that, those.

(1x7=7)

**Look at the picture and choose the correct word.**

<b>this</b>	<b>that</b>	<b>this</b>	<b>that</b>
			
<b>these</b>	<b>those</b>	<b>these</b>	<b>those</b>
			
<b>this</b>	<b>these</b>	<b>that</b>	<b>those</b>
			
<b>this</b>	<b>that</b>		
			

Q7) Write in the alphabetical order.

(1x5=5)

- a) T                      C                      Z                      A
- \_\_\_\_\_

b) G                    Y                    H                    R

\_\_\_\_\_

c) N                    E                    W                    D

\_\_\_\_\_

d) S                    U                    P                    R

\_\_\_\_\_

e) H                    L                    C                    M

\_\_\_\_\_

**Q8) Write five lines on My Pet.**

**(3)**

---

---

---

---

---

---

---

सैंट. पी. बी. ँन. पब्लिक स्कूल  
इकाई परीक्षा : II  
कक्षा : पहली  
हिंदी  
SAMPLE PAPER

समय: 2 घंटे

अंक: 40

नाम: \_\_\_\_\_

अनुक्रमांक: \_\_\_\_\_

सामान्य निर्देश:

1. सभी प्रश्नों के उत्तर देना अनिवार्य है।
2. लेख और वर्तनी का ध्यान रखें।
3. प्रश्नों को ध्यान से पढ़कर उत्तर दीजिए।

प्रश्न 1. 'अँ' की मात्रा के पाँच शब्द लिखें।

(1×5=5)

(क) \_\_\_\_\_ (ख) \_\_\_\_\_

(ग) \_\_\_\_\_ (घ) \_\_\_\_\_

(ङ) \_\_\_\_\_

प्रश्न 2. चित्र को देखकर उनके नाम लिखें।

(1×5=5)



- \_\_\_\_\_



- \_\_\_\_\_



- \_\_\_\_\_



- \_\_\_\_\_



- \_\_\_\_\_

प्रश्न 3. दिए गए शब्दों में से सही जगह पर 'ए' तथा 'ऐ' की मात्रा लगाइए।

(1×5=5)

(क) सब \_\_\_\_\_ (ख) सपरा \_\_\_\_\_

(ग) बठना \_\_\_\_\_ (घ) मदान \_\_\_\_\_

(ङ) सर \_\_\_\_\_

प्रश्न 4. पाँच सब्जियों के नाम लिखिए।

(1×5=5)

(क) \_\_\_\_\_ (ख) \_\_\_\_\_

(ग) \_\_\_\_\_ (घ) \_\_\_\_\_

(ङ) \_\_\_\_\_ (च) \_\_\_\_\_

प्रश्न 5. 'औ' की मात्रा के शब्दों पर गोला लगाइए।

(1×5=5)

होली

मौसी

खिलौना

रोटी

कटोरी

तौलिया

चौकी

पोटली

मोर

पौधा

प्रश्न 6. एक से दस तक गिनती लिखें ।

(0.5x10=5)

_____	_____
_____	_____
_____	_____
_____	_____
_____	_____

प्रश्न 7. चित्रों से शब्दों का सही मिलान कीजिए।

(1×5=5)



(क)

पंखा



(ख)

शंख

(ग)




ऊँट

(घ)



अँगूठी

(ङ)



प्रातः

प्रश्न 8. रंगों के नाम लिखिए।

(1×5=5)

(क) \_\_\_\_\_

(ख) \_\_\_\_\_

(ग) \_\_\_\_\_

(घ) \_\_\_\_\_

(ङ) \_\_\_\_\_

(च) \_\_\_\_\_

**St. PBN PUBLIC SCHOOL**  
**UNIT TEST-II**  
**CLASS - I**  
**MATHEMATICS**  
**SAMPLE PAPER**

TIME: 2 Hours

M.M- 40

NAME: \_\_\_\_\_

ROLL NO: \_\_\_\_\_

**GENERAL INSTRUCTIONS:**

1. All questions are compulsory.
2. Read each question carefully.

1. Tick the correct answer (1x15=15)

(i) Subtraction means.

(a) Add (b) Minus

(ii) What will come before 67?

(a) 68 (b) 66

(iii)  $15-6 =$

(a) 9 (b) 10

(iv)  $6-6=$

(a) 1 (b) 0

(v) Is chair heavier than the weight of an eraser?

(a) Yes (b) No

(vi) 4 is bigger than

(a) 3 (b) 20

(vii) Which of the following is correct?

(a)  $7+5= 12$  (b)  $8-4 = 18$

(viii) Which animal is lighter in weight?

(a) Dog (b) Rat

(ix) I come just before 76

(a) 75 (b) 77



(x) Length can be measured by handspan.

(a) Yes

(b) No

(xi) Which of the following is One more than 5.

(a) 6

(b)

(xii) Which thing is lighter?

(a) Table

(b) Ball

(xiii) 6 tens + 2 ones

(a) 62

(b) 16

(xiv) Which of the following is incorrect?

(a) Twenty

(b) Nineteen

(xv) Tick the smaller number.

(a) 1

(b) 23

**2. Solve the following questions.**

(i) Count backward, and write the missing numbers:

(2)

(a) 170, \_\_\_\_\_, 168, \_\_\_\_\_, 166, \_\_\_\_\_, 164, \_\_\_\_\_, 162

(ii) Fill in the blanks with heavier than or lighter than.

(2)

(a) The elephant is \_\_\_\_\_ the rat.

(b) The cat is \_\_\_\_\_ the cow.

(iii) Arrange the numbers in descending order.

(1)

56, 25, 51, 67

\_\_\_\_\_  
(iv) Write the missing numbers.

(2)

(a) 150, \_\_\_\_\_, 148, \_\_\_\_\_, 146, \_\_\_\_\_, 144, \_\_\_\_\_, 142

(v) Fill in the blanks

(1)

(a) 6 tens - 5 ones = \_\_\_\_\_

**3. Write the number names of the following.**

**(1x4=4)**

(i) 75 = \_\_\_\_\_

(ii) 63 = \_\_\_\_\_

(iii) 34 = \_\_\_\_\_

(iv) 86 = \_\_\_\_\_

**4. Word problems.**

**(2x2=4)**

(i) Mira bought 9 balloons to decorate her friend's birthday party. Out of them 2 balloons burst out. How many balloons are left with Mira for decoration?

\_\_\_\_\_ - \_\_\_\_\_ = \_\_\_\_\_

(ii) Ram collected 5 oranges from the garden. Then his grandmother gave 3 more oranges. How many oranges does he have in all?

\_\_\_\_\_ + \_\_\_\_\_ = \_\_\_\_\_

**5. Dodging of tables.**

**(1x5=5)**

(i)  $4 \times 5 =$  \_\_\_\_\_.

(ii)  $2 \times 8 =$  \_\_\_\_\_.

(iii)  $2 \times 2 =$  \_\_\_\_\_.

(iv)  $3 \times 9 =$  \_\_\_\_\_.

(v)  $3 \times 5 =$  \_\_\_\_\_.

**6. Match the following.**

**(1x5=5)**

(i)  $13 + 5$                       (=)

(ii)  $11 - 1$                       52

(iii) 56                              18

(iv) 5 tens 2 ones              10

(v) Equal                          fifty six

**7. Case study :-**

**(1x4=4)**

**Kartik is planning to grow vegetables in his kitchen garden. he has 9 packets of seeds. out of them, 6 packets are of sunflower seeds and 3 are of watermelon seeds. how many packets of watermelon seeds are there?**

Now answer these questions:

A) How many sunflower seeds are there?

\_\_\_\_\_

B) How many watermelon seeds are there?

\_\_\_\_\_

C) How many seeds are there in total?

\_\_\_\_\_

D) According to you plantation is correct. (yes/no)

\_\_\_\_\_

**8. True or False :**

**(1x5=5)**

(i)  $56 < 10$

\_\_\_\_\_

(ii)  $10 - 2 = 8$

\_\_\_\_\_

(iii) 45 can be read as thirty five.

\_\_\_\_\_

(iv) 50 can be read as fifty.

\_\_\_\_\_

(v) 2 tens and 5 ones makes 13.

\_\_\_\_\_

**St. PBN Public School**  
**Unit Test- II**  
**Subject - EVS**  
**Class - I**  
**Sample Paper**

**TIME:2 Hours**

**M.M- 40**

**NAME:** \_\_\_\_\_

**ROLL NO:** \_\_\_\_\_

**GENERAL INSTRUCTIONS:**

- 1. All questions are compulsory.**
- 2. Read each question carefully.**

**1. Tick the correct answer**

**(1x10=10)**

(i) Who drives a bus?

(a) The teacher

(b) The driver

(ii) Where do we go to withdraw money?

(a) Bank

(b) Post office

(iii) What do hens give us?

(a) Eggs

(b) Milk

(iv) The sole of Seema's shoe has come off .whom should she go to?

(a) Nurse

(b) Cobbler

(v) Who keeps our school safe?

(a) Guard

(b) Bus driver

(vi) Which meal do we eat in the afternoon?

(a) Lunch

(b) Dinner

(vii) We should pluck the flowers from the neighbourhood park.

(a) Yes

(b) No

(viii) Which of these is not healthy?

(a) roti

(b) pizza

(ix) Who helps a doctor in hospital.

(a) Nurse

(b) Teacher

(x) Full form of ATM machine.

(a) Automated teller machine.

(b) Auto time Machine.

**2. Fill in the Blanks.****(1×5=5)**

Railway station	Softboard	Foods	Classroom	Teachers
-----------------	-----------	-------	-----------	----------

- (i) We eat different kinds of \_\_\_\_\_.
- (ii) We study in the \_\_\_\_\_.
- (iii) We should respect our \_\_\_\_\_.
- (iv) We go to \_\_\_\_\_ to take trains to different places.
- (v) \_\_\_\_\_ is used to see moving pictures.

**3. State true or false for the following statements.****(1×5=5)**

- (i) Food gives us energy to work and play.
- (ii) We should carry toffees in a pencil box.
- (iii) A tailor keeps our country safe.
- (iv) In school, each child has a mobile phone.
- (v) We go to police station to post letters and parcels.

**4. Answer the following questions in brief:****(2×3=6)**

(i) What are the two meals in our day?

---

---

(ii) What does a firefighter do?

---

---

(iii) What is Soft Board?

---

---

---

**5. Case based questions:**

**(1x4=4)**

There was a boy named Ramu. He was the only son of his parents, and he was very stubborn. He always ate junk food. His parents always tried to stop him, but he never listened to them.

Once, because of eating junk food, he had a severe stomach problem and got loose motions. He had to go to the doctor. The doctor advised him not to eat junk food and also gave him an injection. Since then, Ramu understood the doctor's advice, and now he eats healthy food."

1. Name one junk food.

---

2. Who is Ramu?

---

3. Which good habit will help Ramu ?

---

4. What happened to Ramu after eating junk food?

---

**6. Match the following.**

**(1x5=5)**

(i) Neighbours

Bank



- |                |               |
|----------------|---------------|
| (ii) Money     | Schools       |
| (iii) Gardener | Garden        |
| (iv) Eggs      | Neighbourhood |
| (v) Soft Board | Animals       |

**7. Name the following –**

**(1x5=5)**

- (i) The \_\_\_\_\_ is the head of our school.
- (ii) We Get nuts from \_\_\_\_\_.
- (iii) A person who helps to keep the house clean. \_\_\_\_\_
- (iv) Orange, banana, mango are \_\_\_\_\_.
- (v) We go to \_\_\_\_\_ to wait for a bus.

**St. PBN Public School**  
**Unit Test- II**  
**Class - I**  
**Computer**  
**Sample Paper**

TIME:2 Hours

M.M- 40

NAME: \_\_\_\_\_

ROLL NO: \_\_\_\_\_

**GENERAL INSTRUCTIONS:**

1. All questions are compulsory.
2. Read each question carefully.

NAME: \_\_\_\_\_

ROLL NO: \_\_\_\_\_

**1. Tick the correct answer.**

**(0.5x4=2)**

- a) A \_\_\_\_\_ helps you to draw pictures.
- i. Mouse                                      ii. Keyboard                                      iii. Monitor
- b) A \_\_\_\_\_ is used to type roll no.
- i. Mouse                                      ii. Keyboard                                      iii. CPU
- c) \_\_\_\_\_ means pressing the right mouse button once.
- i. Right click                                      ii. Double click                                      iii. Left click
- d) The \_\_\_\_\_ on a laptop does the same job as the mouse of a computer.
- i. Mouse pad                                      ii. Touch pad                                      iii. Keypad

**2. Fill in the blanks:**

**(1x5=5)**

**(Computer, CPU , mouse pointer, Two, Monitor)**

- a) A \_\_\_\_\_ is used to do practical in schools.
- b) \_\_\_\_\_ is the brain of computer.
- c) A mouse is used to move the \_\_\_\_\_
- d) Mouse has \_\_\_\_\_ buttons.
- e) A \_\_\_\_\_ looks like a tv.

**3. State the following statements as True or False**

**(1x5=5)**

- a. Mouse can be attached to CPU with wire.

\_\_\_\_\_

**b.** Clicking the left button one is called a double click.

\_\_\_\_\_

**c.** The Keyboard is known as the brain of computer.

\_\_\_\_\_

**d.** A mouse is Large in size.

\_\_\_\_\_

**e.** We can play games on monitor.

\_\_\_\_\_

**4. Answer the following questions in one word:**

**(1x4=4)**

a) Which mouse action is used to select an item?

---

b) Which part of computer is used to write numbers?

---

c) Which part of computer is used to show output?

---

d) Which part of computer is used to perform instructions given by you?

---

**5. Case study based questions-**

**(1X4=4)**

**a. Write the name of the parts of computer:**

a)



---

b)



---

c)



---

d)



---