

**ST. PBN PUBLIC SCHOOL, GURUGRAM**  
**UNIT TEST-III**  
**CLASS – II**  
**ENGLISH**  
**SAMPLE PAPER**

**TIME: 2 Hours**

**MM: 40**

**NAME: \_\_\_\_\_ ROLL NO: \_\_\_\_\_**

**GENERAL INSTRUCTIONS:**

1. All questions are compulsory.
2. Read each question carefully.

**Section (A) [Comprehension]**

**Q1 Read the unseen passage and answer the questions. (5)**

Today is Monica's first day at school. As Monica reaches school, she says Bye to her mother. Her teacher, Helen asks her to talk to other children. She is very excited to make new friends. So, Monica talks to Shelly, Joe and Steffy. She learns that Sherry is a good dancer, Joe is a good singer and Steffy is a good actor. When she thinks about her own self, she is not happy. After she reaches home, her mother asks her why she is sad. She tells her mother about her new friends. So, her mother tells her that all children are special in their own way. This makes her happy again. She awaits to go to school the next day.

a) What does Monica's teacher ask her to do? (1)

---

---

b) What does she find out after talking to Shelly, Joe and Steffy? (2)

---

---

---

c) What does her mother tell her? (1)

---

---

d) Write the opposite of happy. (1)

---

**Section –B (Reader)**

**Q2) Fill in the blanks.**

**(0.5x6=3)**

- a) Birbal's answer \_\_\_\_\_ the ministers.
- b) Animals hated having water from the \_\_\_\_\_.
- c) The king received an \_\_\_\_\_ to camp.
- d) Who had the \_\_\_\_\_ to pull the Emperor's moustache?
- e) The king lived in the camp for \_\_\_\_\_ years.
- f) All the ministers realized that Birbal was \_\_\_\_\_.

**Q3) Write the meaning of the following words.**

**(0.5x6=3)**

a) suggested

\_\_\_\_\_

b) unusual

\_\_\_\_\_

c) emperor

\_\_\_\_\_

d) glades

\_\_\_\_\_

e) cages

\_\_\_\_\_

f) delighted

\_\_\_\_\_

**Q4) Answer the following questions.**

**(1x4=4)**

a) Why were the animals miserable?

\_\_\_\_\_  
\_\_\_\_\_  
\_\_\_\_\_

b) Why was the king sad when he returned back to his kingdom?

\_\_\_\_\_  
\_\_\_\_\_  
\_\_\_\_\_

c) Who was pulling Akbar's moustache?

\_\_\_\_\_  
\_\_\_\_\_

d) What did Akbar ask his ministers?

---

---

**Section- C**

**Q5) Fill in the blanks with can/cannot. (1x4=4)**

- a) A fish \_\_\_\_\_ swim, but it \_\_\_\_\_ talk.
- b) A cat \_\_\_\_\_ read, but it \_\_\_\_\_ eat.
- c) A bird \_\_\_\_\_ fly, but it \_\_\_\_\_ jump.
- d) Lily \_\_\_\_\_ write, but she \_\_\_\_\_ climb the trees.

**Q6) Fill in the blanks with is/am/are. (0.5x4=2)**

- a) Srija \_\_\_\_\_ a great dancer.
- b) Tanu and Mani \_\_\_\_\_ best friends.
- c) Meera's bicycle \_\_\_\_\_ pink in colour.
- d) I \_\_\_\_\_ the captain of the cricket team.

**Q7) Fill in the blanks with was/were. (0.5x4=2)**

- a) You \_\_\_\_\_ late to school yesterday.
- b) Maria \_\_\_\_\_ 3 years old last year.
- c) All my friends \_\_\_\_\_ here last weekend.
- d) She \_\_\_\_\_ singing at a concert last evening.

**Q8) Fill in the blanks with has/have/had. (1x4=4)**

- a) Abhi and Ravi \_\_\_\_\_ a match yesterday.
- b) Misha \_\_\_\_\_ dosa for lunch every day.
- c) Kunal and Shelly \_\_\_\_\_ good manners.
- d) I \_\_\_\_\_ two sisters.

**Q9) Fill in the blanks with do/does. (0.5x4=2)**

- a) Somu \_\_\_\_\_ not stay here.
- b) I \_\_\_\_\_ a lot of hard work.
- c) Max and Ruby \_\_\_\_\_ many toys.
- d) We \_\_\_\_\_ our own bedding.


**Q10) Fill in the blanks with did/did not. (0.5x4=2)**

- a) Her dad \_\_\_\_\_ a lot of cooking yesterday.
- b) I \_\_\_\_\_ like my new sweater.
- c) She \_\_\_\_\_ know what the teacher was teaching.
- d) You \_\_\_\_\_ a lot of hard for this position.

**Q11) Fill in the blanks with is, am, are +ing form of the doing word given in the brackets. (1x4=4)**

- a) You \_\_\_\_\_ the work really fast. (do)
- b) We \_\_\_\_\_ cricket. (play)
- c) She \_\_\_\_\_ very gracefully. (sing)
- d) Shaila \_\_\_\_\_ her teeth. (brush)

**Q12) Look at the picture and write five lines about the same. (5)**



---

---

---

---

---

---

---

---

सेंट. पी. बी. एन. पब्लिक स्कूल  
इकाई परीक्षा III  
कक्षा : दूसरी  
विषय : हिंदी  
Sample Paper

समय : 2 घंटे

अंक : 40

NAME: \_\_\_\_\_

ROLL NO \_\_\_\_\_

- 1 सभी प्रश्नों के उत्तर देना अनिवार्य है।
- 2 लेख और वर्तनी का ध्यान रखें।
- 3 प्रश्नों को ध्यान से पढ़कर उत्तर दीजिए।

**भाग - क**  
**साहित्य**

**प्रश्न 1. निम्नलिखित गद्यांश को पढ़कर प्रश्नों के उत्तर दीजिए।**

**(1x5=5)**

किसी जंगल में एक लोमड़ी रहती थी। एक दिन वह खाने की तलाश में इधर-उधर घूम रही थी। उसे अंगूर की एक बेल दिखाई दी। अंगूर की बेल दीवार पर चढ़ी हुई थी। बेल पर अंगूर के गुच्छे लटक रहे थे। उन्हें देखकर लोमड़ी के मुँह में पानी भर आया। वह अंगूरों को खाने के लिए उछली, लेकिन उन तक पहुँच न पाई। लोमड़ी ने कई बार कोशिश की पर कोशिश सफल न हुई। आखिर वह परेशान होकर घर की तरफ चल दी और बोली अंगूर खट्टे हैं।

**(क) लोमड़ी किसकी तलाश में घूम रही थी ?**

- (i) सोने की ( )                      (ii) खाने की ( )                      (iii) शिकार की ( )

**(ख) बेल पर क्या लगा हुए थे ?**

- (i) अंगूर ( )                      (ii) केले ( )                      (iii) सेब ( )

**(ग) अंगूर की बेल कहाँ पर चढ़ी हुई थी ?**

- (i) पेड़ पर ( )                      (ii) सीढ़ी पर ( )                      (iii) दीवार पर ( )

**(घ) दिए गए शब्दों में से नाम शब्द चुनिए**

- (i) पर ( )                      (ii) अंगूर ( )                      (iii) दिखाई ( )

**(ङ) लोमड़ी परेशान होकर बोली अंगूर \_\_\_\_\_ हैं।**

- (i) मीठे ( )                      (ii) कड़वे ( )                      (iii) खट्टे ( )

**प्रश्न 2. सही वाक्य पर सही (✓) तथा गलत वाक्य पर गलत (X) का निशान लगाइए :**

**(0.5x4=2)**

(क) रानी मधुमक्खी आराम करने के लिए जगह ढूँढ रही थी। ( )

(ख) नन्नू बुखार के कारण खेल नहीं पाया। ( )

(ग) पलाश हैट लगाए आया है। ( )

(घ) रिकू चार साल की है।

( )

**प्रश्न 3. रिक्त स्थान भरिए -**

**(0.5 x 5 = 2.5)**

(क) सारे खिलौने समेटकर \_\_\_\_\_ में डाल देती है।

(ख) सारी किताबें - कॉपियाँ \_\_\_\_\_ बिखरी पड़ी होती है।

(ग) मिठाई पर मक्खियाँ \_\_\_\_\_ रही हैं।

(घ) बच्चा \_\_\_\_\_ कर हँस पड़ा।

(ङ) कुछ दिनों में मेरी डालें \_\_\_\_\_ से भर जाएंगी।

**प्रश्न 4. निम्नलिखित शब्दों के अर्थ लिखिए:-**

**(0.5 x 5 = 2.5)**

(क) मंजरी - \_\_\_\_\_ (ख) स्वार्थी \_\_\_\_\_

(ग) मुखर - \_\_\_\_\_ (घ) गंध - \_\_\_\_\_

(ङ) भाग्य - \_\_\_\_\_

**प्रश्न 5. निम्नलिखित प्रश्नों के उत्तर एक वाक्य में लिखिए -**

**(0.5 x 4 = 2)**

(क) जमीन पर पड़ा कौन रोता रहता है ?

---

---

(ख) कबाड़खाना किसे कहते हैं ?

---

---

(ग) आम को किस बात से खुशी मिलती है ?

---

---

(घ) आदित्य के पापा ने गोलगप्पे क्यों नहीं खाने दिए थे ?

---

---

**प्रश्न 6. निम्नलिखित प्रश्नों के उत्तर लिखिए:-**

**(2 x 3 = 6)**

(क) 'स्वच्छता' पर कोई नारा लिखें ?

---

---

---

(ख) दिन भर की थकान के बाद भी फूल कब उठ जाते हैं ?

---

---

---

(ग) अच्छे बच्चों को किन बातों का ध्यान रखना चाहिए ?

**भाग - ख**  
**व्याकरण**

**प्रश्न 1. रिक्त स्थान भरिए -**

**(1 x 5 = 5)**

(क) कौए का रंग \_\_\_\_\_ होता है।

(ख) हमारी \_\_\_\_\_ आँखें होती हैं।

(ग) मेरा घर \_\_\_\_\_ है।

(घ) वह \_\_\_\_\_ लड़की है।

(ङ) मेरी माँ \_\_\_\_\_ है।

**प्रश्न 2 . निम्नलिखित शब्दों के विलोम शब्द लिखिए :**

**(1x5=5)**

(क) कच्चा - \_\_\_\_\_ (ख) सस्ता - \_\_\_\_\_

(ग) लाभ - \_\_\_\_\_ (घ) एक - \_\_\_\_\_

(ड) आशा - \_\_\_\_\_


प्रश्न 3. 11 से 20 तक गिनती शब्दों में लिखें:-

(0.5x10=5)

_____	_____
_____	_____
_____	_____
_____	_____
_____	_____

प्रश्न 4. निम्न चित्र को देखकर पाँच वाक्य लिखिए ।

(1x5=5)



---

---

---

---

---

---

---

---



**St. PBN PUBLIC SCHOOL, GURUGRAM**  
**UNIT TEST – III**  
**CLASS – II**  
**MATHEMATICS**  
**SAMPLE PAPER**

**TIME: 2 Hours**

**MM-50**

**GENERAL INSTRUCTIONS:**

1. All questions are compulsory.
2. Read each question carefully.

**NAME:** \_\_\_\_\_

**ROLL NO:** \_\_\_\_\_

1. Tick the correct answer (1x10=10)

(i) \_\_\_\_\_ Patterns can be formed by repeating letters in a particular manner.

(a) Alphabet (b) Number

(ii) How many grams are there in 1 kg?

(a) 1000g (b) 100g

(iii) Which is the 6<sup>th</sup> month of the year.

(a) June (b) May

(iv) 4, 8, 12, 16, \_\_\_\_\_

(a) 20 (b) 62

(v) The length of longer object is measured in

(a) Kilometre (b) centimetre

(vi) Which day comes between Monday and Wednesday?

(a) Sunday (b) Tuesday

(vii) Which container can hold more water?

(a) A cup (b) A jug

(viii) How many minutes are there in one hour?

(a) 40 (b) 60

(ix) In which month do we celebrate New Year's Day?

(a) March (b)

January

(x) Identify whether each of the following is a pattern or not

2 6 2 6 2 6 2 6

a) Yes

(b) No

**2. Solve the following.**

**(2x9=18)**

(i) Complete the given Series.

6A, 12B, 18C, \_\_\_\_\_, \_\_\_\_\_, \_\_\_\_\_, \_\_\_\_\_.

(ii) Multiply:

$$\begin{array}{r} \text{(a)} \quad \text{H} \quad \text{T} \quad \text{O} \\ \quad \quad \quad 4 \quad 0 \\ \times \quad \quad \quad 8 \\ \hline \end{array}$$

$$\begin{array}{r} \text{H} \quad \text{T} \quad \text{O} \\ \quad \quad \quad 3 \quad 6 \\ \times \quad \quad \quad 2 \\ \hline \end{array}$$

(iii) Arrange the following weight in descending order:

150gm, 8 Kg, 200gm, 5 Kg

(iv) "Express the given time in digital format (HH:MM)."

(i) Half past 7

(ii) 3 o'clock

(v) Fill in the blanks:

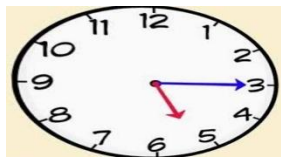
10 ,A, 20, A, \_\_\_\_\_, \_\_\_\_\_, \_\_\_\_\_, \_\_\_\_\_.

(vi) Solve the following:

(a) 1km \_\_\_\_\_ m

(b) 100cm = \_\_\_\_\_ m

(vii) "Write the time after watching the clock":



(viii) Arrange in columns and add.

5km 620m, 3km 200m

(ix) Fill in the blanks:

(a) 3 times 5 is \_\_\_\_\_.

(b)  $4 \times 2 =$  \_\_\_\_\_  $\times 4 = 8$

**3. State True or False**

**(1x4=4)**

(a) February has 29 days in leap year \_\_\_\_\_

(b) 1000g = 1kg \_\_\_\_\_

(c) 6 times 5 is 12 \_\_\_\_\_

(d) In a pattern, shapes or numbers repeat in a specific order. \_\_\_\_\_ (true/false)

**4. Solve the following word problems:**

**(2x2=4)**

(a) Ravi started his homework at 4:00 PM and finished it at 5:30 PM. How long did Ravi take to complete his homework?

(a) There are 4 baskets, and each basket contains 5 apples. How many apples are there in total?

**5. Dodging tables .**

**(1x5=5)**

(i)  $6 \times 3 = \underline{\hspace{2cm}}$ .

(ii)  $8 \times 2 = \underline{\hspace{2cm}}$ .

(iii)  $3 \times 7 = \underline{\hspace{2cm}}$ .

(iv)  $8 \times 8 = \underline{\hspace{2cm}}$ .

(v)  $6 \times 10 = \underline{\hspace{2cm}}$ .

**6. Fill in the blanks.**

**(1x5=5)**

(i) 9 groups of 4 =  $\underline{\hspace{2cm}}$ .

(ii)  $8 \times \underline{\hspace{2cm}} = 56$

(iii)  $7\text{m} = \underline{\hspace{2cm}}\text{cm}$ .

(iv)  $6\text{km} = \underline{\hspace{2cm}}\text{m}$ .

(v)  $21 \div 3 = \underline{\hspace{2cm}}$ .

**7. Case Study :****(1x4=4)**

Riya went to the market with her mother. They bought 2 kilograms of apples, 1 kilogram of bananas, and 3 kilograms of potatoes. They also bought 2 liters of milk. On the way home, Riya carried the apples and bananas, while her mother carried the potatoes and milk.

(a) How much weight did Riya carry in total?

(b) What is the total weight of all the fruits bought?

(c) How much liquid did Riya's mother carry?

(d) What is the total weight of potatoes?

**St. PBN PUBLIC SCHOOL, GURUGRAM**  
**UNIT TEST-III**  
**Class - II**  
**EVS**  
**SAMPLE PAPER**

**Time:2 hour**

**MM-40**

**General Instructions**

1. All questions are compulsory.
2. Read each question and option carefully and choose the best option.
3. Allotted marks are indicated against each question in terms of points.

Name: \_\_\_\_\_

Roll no.: \_\_\_\_\_

**Q.I Fill in the blanks:** (1X5=5)

- i) The \_\_\_\_\_light says stop.
- ii) Vehicles used for travelling on land called means of \_\_\_\_\_.
- iii) Animals that eat leaves, grass, flowers, fruits are called \_\_\_\_\_animals.
- iv) A \_\_\_\_\_ lives in a pen or a barn.
- v) \_\_\_\_\_grow under the ground.

**Q.II Tick the correct answers:** (1x10=10)

- i) Traffic light which says GO!  
a) red                      b) storm                      c) yellow      d) blue
- ii) A touch that makes us bad or scared.  
a) good touch      b) bad touch      c) hard touch      d) soft touch
- iii) Means of transport which are used for travelling on water  
a) land              b) air                      c) water              d) sea
- iv) This animal is used to carry goods and people on their back.  
a) horse              b) cow                      c) sheep              d) dog
- v) Big plants with hard and strong stem.  
a) trees              b) creepers              c) shrubs                      d) herbs
- vi) The part of a plant that gives support to a plant and keeps it straight.

- a) Stem    b) flower    c) leaves    d) branch
- vii) A home made by us for horse
  - a) Burrow    b) hutch    c) stable    d) den
- viii) Bee gives us \_\_\_\_\_
  - a) milk    b) honey    c) wool    d) fruits
- xi) Plants which grow in water
  - a) shrubs    b) herbs    c) Creepers    d) water plants
- x) A thing that produces heat or power to make a vehicle move
  - a) Smoke    b) fuel    c) CNG    d) Petrol

**Q.III. Write true or false:**

(1x5=5)

- 1. A lion lives in a den.
- 2. Stems are used to make perfumes.
- 3. Creepers have big fruits.
- 4. CNG is a fuel that is very harmful.
- 5. We should stay away from electric sockets.

---



---



---



---



---

**Q.VI. Answer the following questions:**

(2x4=8)

Q.1 Which animals are called flesh eating animals?

Ans \_\_\_\_\_

---



---

Q.2 How can we take care of our domestic animals?

Ans \_\_\_\_\_

---



---

Q.3 What we should do if anyone touches in a way that we do not like?

Ans \_\_\_\_\_

---



---

Q.4 What do you mean by communication?

Ans \_\_\_\_\_

---





**Q.V Match the following:**

(4x1=4)

- |              |                |
|--------------|----------------|
| a) Creepers  | to stop        |
| b) cow       | land transport |
| c) train     | Milk           |
| d) red light | watermelon     |

**Q.VI. Identify the pictures and write about it-**

(4x1=4)

1. 
2.   
\_\_\_\_\_
3.   
\_\_\_\_\_
4.   
\_\_\_\_\_

**Q.VII Case study question: -**



Riya and Aman were walking in the park near their house. They saw many plants around them. There were tall trees, colourful flowers, and green bushes. Riya noticed a mango tree and said, "This tree gives us sweet mangoes!" Aman pointed to the rose plants and said, "These flowers smell so nice!" They also saw a gardener watering the plants. The gardener told them that plants need sunlight, water, and soil to grow. Riya and Aman felt happy to learn how plants make the park beautiful and useful.

### **Questions and Answers:**

1. Question: What kind of tree did Riya notice?

Answer: \_\_\_\_\_

2. Question: What type of plant is rose plants?

Answer: \_\_\_\_\_ .

3. Question: Which part of plant make food from sunlight?

Answer: \_\_\_\_\_

Question: How can we take care of plant?

Answer: \_\_\_\_\_

**St. PBN Public School, Gurugram**  
**Unit Test- III**  
**Class – II**  
**Subject – Computer**  
**Sample Paper**

TIME: 1 Hour

MM: 20

**GENERAL INSTRUCTIONS:**

1. All questions are compulsory.
2. Read each question carefully.

NAME: \_\_\_\_\_

ROLL NO: \_\_\_\_\_

**1. Tick the correct answer.**

**(0.5x5=2.5)**

- a) A \_\_\_\_\_ is used to transfer data from one computers to another
- i. Pen drive                      ii. Hard disk                      iii. Memory card
- b) The full form of PD is \_\_\_\_\_
- i. Pen drive                      ii. Hard drive                      iii. CD drive
- c) Color1 is used to choose the \_\_\_\_\_ colour.
- i. Line                              ii. Shape                              iii. Filled
- d) The \_\_\_\_\_ tool is used to draw a curved line.
- i. Circle                              ii. Curve                              iii. Line
- e) The \_\_\_\_\_ tool is used to write text in paint.



**2. Fill in the blanks:**

**(0.5x5=2.5)**

**(save, shapes, hard disk, storage, blue-ray disc)**

- a) The \_\_\_\_\_ button is used to save drawing in paint.
- b) You can select the star shape from the \_\_\_\_\_ group.
- c) A \_\_\_\_\_ is fixed inside the CPU cabinet.
- d) \_\_\_\_\_ devices are used to store data.

e) A \_\_\_\_\_ is used to store HD videos.

**3. State the following statements as True or False**

**(1x5=5)**

- a. A hard disk looks like round in shape. \_\_\_\_\_
- b. A CD stores more than DVD. \_\_\_\_\_
- c. The size group is used to change the line size. \_\_\_\_\_
- d. A DVD is an optical disc. \_\_\_\_\_
- e. Color 2 is used to choose the line colour. \_\_\_\_\_

**4. Answer the following questions in one word:**

**(1x4=4)**

- a) How many styles are there in the fill option to draw colour-filled shapes?  
\_\_\_\_\_
- b) Name a storage device that is mainly used in mobile phones.  
\_\_\_\_\_
- c) Which tool is used to draw house in paint?  
\_\_\_\_\_
- d) Which tool is used to draw a ball in paint?  
\_\_\_\_\_

**5. Write the full form of following-**

**(1x2=2)**

- 1. D VD \_\_\_\_\_
- 2. HDD \_\_\_\_\_

5. Case study based questions-

(1X4=4)

a. Identify and write the name of following-




1.

---



2.

---



3.

---

4.



---