

ST.PBN PUBLIC SCHOOL, GURUGRAM

UT – 3 SAMPLE PAPERS

CLASS – U.K.G.

SUBJECT –ENGLISH

Time -2hours

M.M -35

Q-1. Identify the pictures and write their names: (1×6=6)













Q-2 Match the words with their rhyming words:

(1×6=6)

- | | |
|--------|--------|
| 1. Dog | a. Pot |
| 2. Sun | b. Run |
| 3. Bug | c. tub |
| 4. Mop | d. Log |
| 5. cub | e. Rug |
| 6. Hot | f. Top |

Q-3. Fill the missing letters:

(1×5=5)


1. P ____ t
2. C ____ d
3. B ____ s
4. N ____ n

5. H ___ t


Q-4. Circle the odd one out : (1×6=6)

1. Sun, run, box, bus
2. Log, god, cow, rug
3. Pot, hot, dot, bug
4. Fun, rug, Hug, top
5. Hug, Cod, dog, rod
6. Cub, sun, bun, run

Q-5 Read the lines and fill in the blanks : (1×6=6)

1. The  _____ is up. It is 
_____.

2. Bob is a  _____. He has a 
_____.

3. This is a  _____. This is a 
_____.

Q-6. Write the dictation words:

(1×6=6)

1. _____
2. _____
3. _____
4. _____
5. _____
6. _____

ST.PBN PUBLIC SCHOOL, GURUGRAM

UT – 3 SAMPLE PAPERS

CLASS – U.K.G.

SUBJECT –MATHS

Time -2 hours

M.M-35

Q-1. Match number names with numbers:

(1×5=5)

- | | |
|-----------------|-------|
| 1. Thirty four | a. 40 |
| 2. Twenty six | b. 34 |
| 3. Forty | c. 26 |
| 4. Thirty | d. 27 |
| 5. Twenty seven | e. 30 |

Q-2. Write next two missing numbers in each:

(0.5×8=4)

1. 57 , _____ , _____
2. 66 , _____ , _____
3. 72 , _____ , _____
4. 87 , _____ , _____



Q-3. Write number names :



(1×10=10)



1. 24 _____
2. 37 _____
3. 33 _____
4. 28 _____
5. 36 _____
6. 26 _____
7. 40 _____
8. 32 _____
9. 22 _____
- 10.29 _____



Q-4. Add numbers through pictures:

(1×8=8)



 +  =



 +  =



 +  =

 +  =

 +  =

 +  =

 +  =


 +  =

Q-5. Subtract numbers through pictures:


(1×8=8)



$$9 - 3 = \square$$



$$7 - 4 = \square$$



$$6 - 4 = \square$$



$$2 - 1 = \square$$



$$6 - 5 = \square$$



$$4 - 2 = \square$$



$$3 - 1 = \square$$



$$6 - 3 = \square$$

सेंट. पी. बी. एन. पब्लिक स्कूल, गुरुग्राम

इकाई परीक्षा : III

कक्षा : UKG

विषय : हिंदी

Sample Paper

समय: 2 घंटे

अंक: 35

नाम: _____


अनुक्रमांक: _____

सामान्य निर्देश:


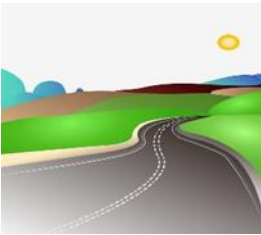
1. सभी प्रश्नों के उत्तर देना अनिवार्य है।
2. लेख और वर्तनी का ध्यान रखें।
3. प्रश्नों को ध्यान से पढ़कर उत्तर दीजिए।

प्रश्न 1. चित्र को देखकर शब्द लिखिए।

(1x10=10)









प्रश्न 2. वर्णों को जोड़कर लिखिए।

(1x8=8)

(क) न + म + क = _____

(ख) ह + व + न = _____

(ग) ब + र + ग + द = _____

(घ) न + ट + ख + ट = _____

(ङ) श + ल + ग + म = _____

(च) अ + द + र + क = _____


(छ) श + ह + द = _____


(ज) ट + ह + ल = _____


प्रश्न 3. चित्र को पहचानकर वाक्य पूरा करिए।

(1x7=7)


(क)  _____ चख |

(ख)  _____ उधर रख |

(ग)  _____ खा |

(घ)  _____ पर चढ़ |

(ङ)  _____ कर |

(च) यह  _____ पकड़ |

(छ)  _____ चख |

प्रश्न 4. शब्द को चित्र से मिलाओ।

(1x5=5)

(क) महल



(ख) मगर



(ग) शलगाम



(घ) अदरक



(ङ) खटमल



प्रश्न 5. श्रुतलेख लिखें।

(1x5=5)

(क) _____

(ख) _____

(ग) _____

(घ) _____

(ङ) _____

(च) _____

ST. P.B.N. PUBLIC SCHOOL, GURUGRAM

UT – 3 SAMPLE PAPERS

CLASS – U.K.G.

SUBJECT – EVS

Time – 2 hours

M.M – 35

Q-1. Match the pictures with their correct names:

(1×6=6)

lion



zebra



monkey



tiger



elephant






bear



Q-2. Identify the pictures and write their names:

(1×6=6)



Q-3. Complete the following information about yourself :

(1×5=5)

1. My name is _____.
2. I am a _____.
3. I am _____ years old.
4. I study in _____ class.
5. My favourite fruit is _____.

Q- 4. Write 'W' for wild animals and 'D' for domestic animals:

(1×6=6)



Q-5. Tick the correct answer:

(1×6=6)

1. Dog is a _____ animal.
a. Domestic b. Wild
2. Sheep gives us _____.

