

ST. PBN PUBLIC SCHOOL, GURUGRAM
UNIT TEST-III
CLASS – IV
ENGLISH
SAMPLE PAPER

TIME: 2 Hours

MM: 40

NAME: _____ ROLL NO: _____

GENERAL INSTRUCTIONS:

1. All questions are compulsory.
2. Read each question carefully.

Section (A) [Comprehension]

Q1 Read the unseen passage and answer the questions given below. (5)

Once upon a time, in a small village, there lived a kind girl named Anya. Anya loved animals and often helped her father on their farm. One sunny day, while walking near the river, she found a little puppy that was lost and shivering. Anya picked up the puppy and took it home. She named it Max.

Anya took care of Max, feeding him and playing with him every day. Max became very happy and loved Anya very much. They played together in the fields, ran around the trees, and even went on adventures to explore the village. Everyone in the village loved Max too, and he became a part of Anya's family.

One day, while playing in the garden, Max chased a butterfly and ran away. Anya searched everywhere for him, calling his name, "Max! Max!" Finally, she found him under a big tree, happily barking at the butterfly. Anya was relieved and hugged Max tightly. She learned that even when things seem scary, love and friendship always bring happiness.

- (i) **What did Max do one day while playing in the garden?**
- (ii) **How did Anya feel when she couldn't find Max?**
- (iii) **What lesson did Anya learn from her experience with Max?**
- (iv) **What did Anya name the puppy?**
- (v) **How did Anya take care of Max?**

Section –B(Reader)

Q2). Answer the following questions. (1x4=4)

- a) What startled and spooked Appu in the garden?
- b) Why do we need to preserve the nature?
- c) What do you think parents of Roberta, Peter and Phyllis are like?

d) What does 'great railway accident' refer to?

Q3.) Fill in the blanks.

(0.5x4=2)

- a) Ajar Uchu was known as the _____.
- b) Appu's mother wanted some fresh _____.
- c) Father was always _____.
- d) Peter was a _____ boy.

Q4) Write the meaning of the following words.

(0.5x4=2)

- a) cherish
- b) strive
- c) comfy
- d) reigned

Q5) Case Based Question

(2x2=4)

The world with its countries, mountains and seas, people and creatures, flowers and trees, the fish in the waters, the birds in the air, are calling to ask us. All to take care.

Q1) Name the poem and the poet.

Q2) How important is it to preserve the nature and why?

Section – C (Grammar)

Q6) Fill in the blanks with pronouns.

(0.5x4=2)

- 1. The children locked ___ up in the cupboard while playing hide and seek.
- 2. I bought ___ flowers for my anniversary.
- 3. All the boys participated in the race and ___ one of them got a prize.
- 4. ___ of the witnesses were present in the court.

Q7) Fill in the blanks with the -ing form of the verbs. Add is, am, are. (1x4=4)

- a) The birds _____(drink) water.
- b) We _____(drive) to the beach since it is a holiday.
- c) Lata _____(learn) English.
- d) Romola _____(play) the piano.

Q8) Fill in the blanks with correct form of verb.

(1x4=4)

- a) Daisy _____(bring) some chocolates yesterday.
- b) Annie _____(drink) espresso in the morning.
- c) I _____(give) my mother a CD of my birthday last week.
- d) We _____(lose) our keys last Friday.

Q9) Complete the sentences using Simple Future Tense. (1x4=4)

- a) You _____ (be) the future of the country.
- b) We _____ (paint) our house next month.
- c) The sun _____ (rise) at 6 am.
- d) They _____ (meet) our friends tomorrow.

Q10) Fill in the blanks with can, may, should, must. (1x4=4)

- a) I know he speaks five languages, but _____ he speak Chinese?
- b) _____ I come in please?
- c) You ___ follow the traffic rules.
- d) It ___ be difficult to live amidst war.

Section – D (Writing Skill)

Q11) Write a paragraph on My Favourite Season . (5)

सेंट. पी. बी. एन. पब्लिक स्कूल, गुरुग्राम
इकाई परीक्षा : III
कक्षा : चौथी
विषय : हिंदी
SAMPLE PAPER

नाम: _____

अनुक्रमांक: _____

समय: 2 घंटे

अंक: 40

सामान्य निर्देश:

1. सभी प्रश्नों के उत्तर देना अनिवार्य है।
2. लेख और वर्तनी का ध्यान रखें।
3. प्रश्नों को ध्यान से पढ़कर उत्तर दीजिए।

भाग - क

साहित्य

प्रश्न 1. निम्नलिखित गद्यांश को पढ़कर प्रश्नों के उत्तर दीजिए।

(1 x 5 = 5)

कुछ लोग परिश्रम की अपेक्षा भाग्य को महत्त्व देते हैं। उनका कहना है कि जो भाग्य में होगा अवश्य मिलेगा, इसलिए दौड़ धूप करना व्यर्थ है। परंतु आलसी बनकर बैठे रहना और असफलता के लिए भाग्य को कोसना किसी प्रकार भी उचित नहीं। परिश्रम के बल पर मनुष्य भाग्य की रेखाओं को बदल सकता है। परिश्रमी व्यक्ति स्वावलंबी, ईमानदार और चरित्रवान होता है। परिश्रम के द्वारा ही मनुष्य अपनी, परिवार की, जाति की तथा राष्ट्र की उन्नति में सहयोग दे सकता है। अतः परिश्रम करने की प्रवृत्ति मनुष्य को विद्यार्थी जीवन से ही ग्रहण करनी चाहिए।

(I). भाग्य को महत्त्व देने वालों का कहना है कि-

(i) जो भाग्य में नहीं होगा वही मिलेगा ()

(ii) जो भाग्य में होगा, वह मिलेगा ()

(iii) जो परिश्रमी होगा वही पाएगा ()

(iv) भाग्य हमारा संरक्षक है ()

(II). क्या उचित नहीं है?

(i) आलसी बैठे रहना ()

(ii) भाग्य को कोसना ()

(iii) कर्म न करना ()

(iv) (i) और (ii) दोनों ()

(III). परिश्रमी व्यक्ति कैसे होते हैं?

(i) स्वावलंबी, ईमानदार और चरित्रवान ()

(iii) बुद्धिमान और साहसी ()

(ii) मूर्ख और आलसी ()

(iv) इनमें से कोई नहीं ()

(IV). गद्यांश का उचित शीर्षक दीजिए-

(i) परिश्रम का महत्व ()

(iii) आलस्य ()

(ii) स्वार्थी ()

(iv) विधार्थी जीवन ()

(V). आलसी शब्द का विपरीतार्थक है

(i) मूर्ख ()

(iii) परिश्रमी ()

(ii) बुद्धिमान ()

(iv) ईमानदार ()

**प्रश्न 2. सही वाक्य पर सही (✓) तथा गलत वाक्य पर गलत (X) का निशान लगाइए।
(0.5x4=2)**

(क) मीठी वाणी से हम पराए को भी अपना बना सकते हैं। ()

(ख) शब्द कभी नहीं मरता है। ()

(ग) गेंद की सहायता से उन्होंने पौधों में बिजली की लहर सी दौड़ाई। ()

(घ) आश्रम में आने वाला कोई भी व्यक्ति गुरु जी के प्रश्नों का उत्तर नहीं दे पता था। ()

प्रश्न 3. रिक्त स्थान भरिए।

(0.5 x 5 = 2.5)

(क) सौ – सौ बार _____ कर बोलो।

(ख) बात यही _____ रे।

(ग) बुरा न _____।

(घ) बुरा _____ ना।

(ङ) बुरा न _____ बोल रे।

प्रश्न 4. निम्नलिखित शब्दों के अर्थ लिखिए।

(0.5 x 5 = 2.5)

यंत्र, सिद्ध, अनमोल, टटोलना, स्पष्ट

प्रश्न 5. निम्नलिखित प्रश्नों के उत्तर एक वाक्य में लिखिए।

(0.5 x 4 = 2)

(क) कवि ने सबसे अच्छा धन किसे कहा है ?

(ख) तोता क्या खाकर मीठा बोलत है ?

(ग) हरिमन को किसने आवाज देकर रोका ?

(घ) हमारा जीवन निर्मल कब हो सकता है ?

प्रश्न 6. निम्नलिखित प्रश्नों के उत्तर लिखिए।

(2 x 3 = 6)

- (क) डॉ. बसु ने कहाँ – कहाँ शिक्षा प्राप्त की ?
(ख) हरिमन और रधिया की चिंता का क्या कारण था ?
(ग) 'इनसानियत' कहानी से हमें क्या शिक्षा मिलती है ?

भाग - ख

व्याकरण

प्रश्न 7. निम्नलिखित शब्दों के लिंग बदलिए। (0.5x6=3)

बाघ , धोबी , नायक , हंस , चिड़ा , वर

प्रश्न 8. निम्नलिखित शब्दों के विलोम शब्द लिखिए। (0.5x6=3)

स्वस्थ , आकाश , चढ़ना , अपना , जागना , उदय

प्रश्न 9. अनेक शब्दों के लिए एक शब्द लिखें। (0.5x6=3)

- (क) वर्ष में एक बार होने वाला ।
(ख) जो नृत्य करता है ।
(ग) जो तैरता है ।
(घ) जो अपने देश का हो ।
(ङ) जो दौड़ता है ।
(च) जहाँ पशु – पक्षी रखे जाते हैं ।

प्रश्न 10. निम्नलिखित वाक्यों को शुद्ध करके लिखें। (1x3=3)

- (क) कृपया करके शांत हों ।
(ख) चिड़िया ने पेड़ में घोंसला बनाया ।
(ग) लगभग तीन बच्चें आए थे ?

प्रश्न 11. निम्नलिखित संख्याओं को शब्दों में लिखें। (1x3=3)

45 , 49 , 54 , 59 , 66 , 72

प्रश्न 11. नीचे दिए गए चित्र को देखकर पाँच वाक्य लिखें। (1x5=5)



- viii. There are _____ vertices in a sphere.
a) 0
b) 1
c) 2
d) 3
- ix. $7 \text{ m} = \underline{\hspace{2cm}}$ cm
a) 7000
b) 700
c) 70
d) 7
- x. Circle the option that is ordered correctly from highest to lowest unit.
a) 7 L, 6010 mL, 5050 mL, 5 L
b) 7 L, 6010 mL, 5L, 5050 mL
c) 6010 mL, 5050 mL, 7 L, 5 L
d) 7 L, 5 L, 6010 mL, 5050 mL

Q.2 Solve the following questions:

(2 X 7= 14)

- i. Reduce in lowest term.
(a) $20/100$
(b) $45/50$
- ii. Write the following decimals in expanded form.
(a) 9.87
(b) 5.04
- iii. Write the measure of the following angles.
(a) Straight angle
(b) Complete angle
- iv. How many 200 mL glasses can be filled from 1L jug?
- v. Add: 24,730 and 19,998
- vi. 15 L of juice was distributed among 40 students. How much juice did each student get?
- vii. Subtract 5,090 from 32,860.

Q-3 Solve the following questions:

(3 X 4 = 12)

- i. Convert the following improper fractions into mixed fractions.
(a) $25/7$
(b) $121/6$
(c) $97/11$
- ii. Convert the following fractions into decimals.
(a) $5^3/10$
(b) $456/1000$
(c) $7/10$
- iii. Find the radius for the given diameters.
(a) 72 cm
(b) 50 cm

(c) 64 cm

- iv. Solve the following:
(a) $320 \text{ km} \times 4$
(b) $3600 \text{ mL} \div 8$

Q-4 Mental Maths

(1 X 10= 10)

- i. $16/2 =$ _____
ii. The place value of '3' in 4.036 is _____.
iii. A polygon having 7 line segments is known as _____.
iv. Compare: 8740 kg _____ 34780 g
v. An equivalent fraction of $16/28$ with denominator 112 is _____.
vi. When a number is divided by, the quotient is _____ and the remainder is zero.
vii. The standard unit of weight is _____.
viii. $44000 \div 100 =$ _____
ix. 6 bottles of 750 mL will make _____ litres.
x. $1200 \times 7 =$ _____

Q-5 Case study Based Question

(1 X 4= 4)

Rohan and his friend loves to eat pizza . Rohan has a pizza that is cut into 8 slices. He eats 2 slices and gives 2 slices to his friend.



1. What fraction of the pizza did Rohan eat?
2. How many slices of pizza are left with Rohan?
3. What fraction of the slices of Pizza are left with Rohan?
4. What fraction of the pizza did Rohan give to his friend?

St. PBN PUBLIC SCHOOL, GURUGRAM
UNIT TEST-III
CLASS - IV
SUBJECT- EVS
SAMPLE PAPER

Time: 2 hours

MM-40

NAME: _____

DATE: _____

GENERAL INSTRUCTIONS:

1. Read all the questions carefully before attempting.
2. All questions are compulsory.
3. Do as directed.

Q1. Choose the correct option and write in your answer sheet:

(1x5=5)

1. About _____ of the Earth's surface is covered with water?
a) 71 % c) 35%
b) 43% d) 66%
2. We must brush our teeth _____ a day.
a) twice c) thrice
b) four times d) ten times
3. Which features are found in houses in the present days?
a) electricity supply c) designated parking space
b) marble flooring. d) all of these
4. Which of these can be recycled?

a) Tea leaves. b) Metal object
c) Fruit peel d) All of the above
5. Which of these are not waterproof?
a) Nylon
b) Animal fibres.
c) Rayon
d) Polyester

Q2. Fill in the blanks: -

(1x5=5)

- a) We dress according to the _____ of a place.
- b) _____ is an example of biodegradable waste.
- c) _____ is the largest slum in the world
- d) _____ helps impurities to settle down in water.
- e) An adult has _____ and _____ incisors and canines respectively.

Q3. State True or False.

(1x5=5)

- a) We must brush twice a day.
- b) _____ is used to disinfect water.
- c) _____ water collects in open spaces, sand or gravel layers.
- d) Non-Biodegradable material is collected in the bin of pink colour.
- e) We get cotton from _____.

Q4. Answer the following questions in brief:

(2x5=10)

- a) What kind of teeth do carnivorous have? Name two carnivorous animal.
- b) Write two causes and effect of water pollution.
- c) How is rain formed?
- d) Define reduce, reuse and recycle.
- e) Who manages the waste in cities and towns?

Q5. Answer the following questions in detail:

(3x3=9)

- a) What are the different ways of preserving our clothes
- b) Define evaporation, condensation and precipitation with diagram.
- c) Write the correct way of brushing our teeth.

Q6. Draw a diagram of various types of teeth in our mouth.

(2x1=2)

Or

Draw a diagram of water cycle.

Q7. Case study based question:

(4)

In a bustling city neighborhood, three siblings—Neha, Anuj, and Priya—decided to make their home eco-friendly by applying the three R's of waste management: Reduce, Reuse, and Recycle. Neha decided to reduce electricity usage by switching off lights and fans when not needed. Anuj reused old jars and containers to store food items instead of buying new ones. Priya created a compost bin for biodegradable kitchen waste, ensuring it was recycled into nutrient-rich compost for their garden. Their efforts inspired their neighbors to adopt similar practices, making the neighborhood more environmentally conscious.

Answer these questions:

1. What are the three R's of waste management?
2. How did Neha practice "Reduce"?
3. What did Anuj do to practice "Reuse"?
4. How did Priya contribute to "Recycle"?
5. How did their actions influence their neighborhood?

ST. PBN Public School, Gurugram
Unit Test - III
Class-IV
Subject- Computer
Sample Paper

Time: 2 Hours

MM: 40

NAME: _____

ROLL NO: _____

General Instructions:

1. All questions are compulsory.
2. Read each question carefully.

1) Tick the correct answer.

(1×5=5)

1. _____ feature is used to create special text effect.
a) Word art b) Clipart c) Watermark
2. A dim or faded impression of an image or text is called _____.
a) Smart art b) Clip art c) Watermark
3. Which among the shortcut keys is used to save the document?
a) Ctrl+F b) Ctrl+H c) Ctrl+S
4. The set move 10 steps block is present in the _____ blocks palette.
a) Motion b) Music c) Looks
5. _____ is the background of scratch
a) Sprite b) Backdrop c) Stage

2) Fill in the blanks-

(1×5=5)

1. _____ is the predefined pictures in Word.
2. Lines, basic shapes and block arrows are the options of _____ button.
3. Word art option is available on _____ tab.
4. _____ is the place where sprite moves.
5. Music can be added to a scratch project by using the blocks available in the _____ blocks palette.

3) State True or False:

(1×5=5)

1. The costume of a sprite cannot be changed.
2. If the pen shade is 0, then the pen colour will be closer to white.
3. The full screen control is not possible in Scratch.
4. The Clipart option is present on the home tab.

5. The shift key is used to copy the text.

4) Answer in one word or sentence.

(1×5=5)

1. Write the shortcut key for the following function-
 - a. To copy the text
 - b. To open the replace dialog box
2. What is the extension of Scratch?
3. How to insert symbol in document?
4. Which feature is used to change the selected text with another text?

5) Answer the following (Do any 5 questions)

(2×5=10)

1. Explain the term Watermark.
2. What is the use of Word art feature?
3. Write two main features of Scratch?
4. Define Scripts Area.
5. How do you insert sprite in scratch?
6. List the names of any two blocks of the control category.

6) Differentiate between:

(2×2=4)

1. Smart Art and Clipart
2. Sprite and Scratch.

7) Competency based question:



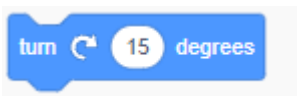

(1×2=2)

1. Aarushi wants to write a poem on Rain in the word document. She wants to apply the decorative text effect to every single line. Suggest to her how she can apply the special text effects.
2. Rahul loves to play the guitar. He wants to play the sound of the guitar in his Scratch project. Help him by suggesting the appropriate block to do the same.

8) Case Based questions:

(1×4=4)

Write the name and use of following options–

1.  _____
2.  _____
3.  _____
4.  _____