




UNIT TEST –III(SAMPLE PAPER)
CLASS – UKG
SUBJECT – ENGLISH


NAME: _____

M.M. : 35

Q1. Identify the picture and write their names:

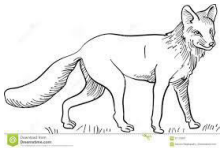
1x10=10







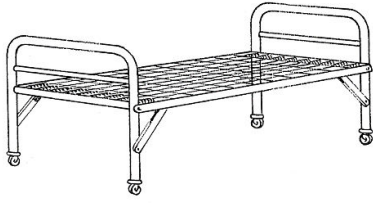
shutterstock.com • 124106950




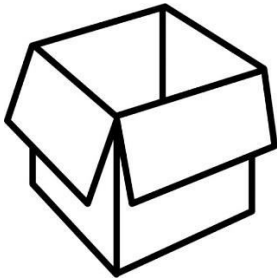
Shutterstock.com • 124106950







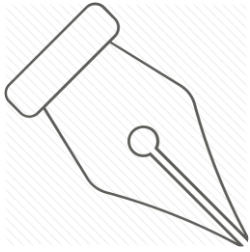






Q.2 Fill in the missing letter:


1x5=5



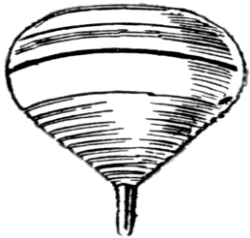
n _ b



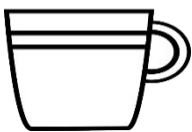
w _ g



l _ p



t _ p



c _ p

Q 3. Circle the correct word:

1x10=10



Kit

Bit



Top

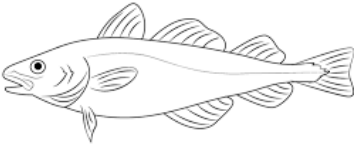
Mop



shutterstock.com • 1011027091

Log

Rib



For more step by step drawing tutorials visit us at www.drawingtutorials101.com

sob

Cod




Dot

Cot



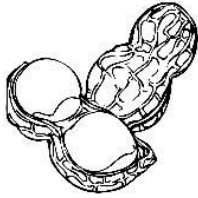
Box

Run



Cup

sun



Hut

Nut



Tub

Sun



Dig

Zip

Q4. Dictation :

1x5=5

1)

2)

3)

4)

5)

Q 5. Match the rhyming words:

1x5=5

Sun

bug

Hug

toy

Lip

Nut

joy

Zip

Hut

bun



UNIT TEST –III(sample paper)
CLASS – UKG
SUBJECT – EVS

NAME: _____

DATE: _____

M.M.: 35


Q1 fill in the missing letter (Wild animals)

2x5=10


1. F _ x




2. Li _ n



3 D _ _ r



4 Be _ r



5 Ti _ _ r




Q2. Match the water animals with their name:

1x5=5



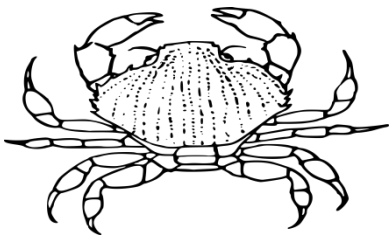
Crab




Shark



Whale





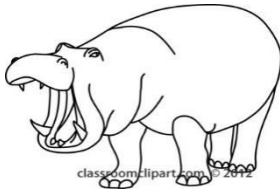



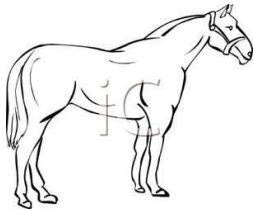
Fish



Seal

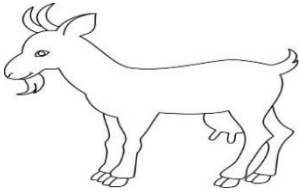
Q4. Write 'W' for Wild Animal & 'D' for Domestic Animals:

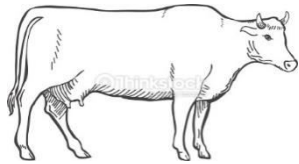
1x10=10





Q4 Write the names of domestic animals:


2x5=10













UNIT TEST –III (Sample paper)

CLASS – UKG

SUBJECT – MATH

MM:35

NAME: _____

Date _____

Q1. Write the number names:

1x10=10

T O

Names

3 4

2 5

3 2

4 0

2 1

2 9

3 7


3 0


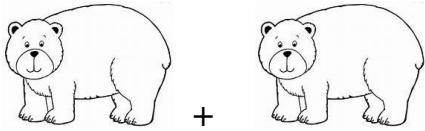
2 8

2 3



Q2. Addition:



1x10=10

 +  =

 +  =

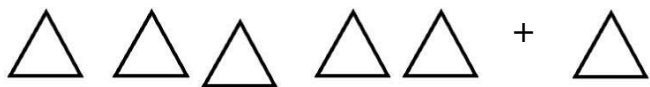

 +  =

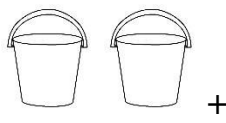
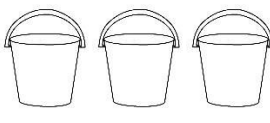

 +  =



 +  = =

 +  =

 +  =

 +  =

 +  +  =

 +  =


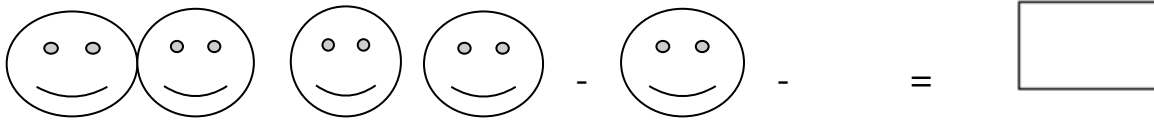
Q 3. Write the missing number (51-100)

0.5x20=10

51	61		81	91
		72		
53				93
			84	
55	65	75		
			86	
57				97
	68	78		
			89	99
60	70	80	90	

Q 4. Subtraction:

$1 \times 5 = 5$





Unit Test –III (Sample Paper)

Class – UKG

Subject- Drawing

Name: _____

Date: _____

Q1. Colour the picture



Q2. Colour your favourite fruit.

