

ST. PBN PUBLIC SCHOOL, GURUGRAM
UNIT TEST-IV
CLASS-1
ENGLISH
SAMPLE PAPER

TIME: 2 Hours

M.M- 40

NAME: _____

ROLL NO: _____

GENERAL INSTRUCTIONS:

- 1. All questions are compulsory.**
- 2. Read each question carefully.**

Section (A)

Q1) Answer the following questions.

(1x4=4)

a) What was the sun proud of?

b) How did fairy godmother help the moon?

c) What is pink?

d) Which fruit is orange in colour?

Q2) Write the meaning of the following:

(0.5x2=1)

a) Speck- _____

b) Mellow- _____

Q3) Fill in the blanks.

(1x4=4)

Clouds	sun	Moon	Pear
---------------	------------	-------------	-------------

a) A _____ is yellow.

b) The _____ float in the sky.

c) Moon and _____ had an argument.

d) Fairy gave _____ many new friends.

Q3) Write True or False.

(1x6=6)

a) The sun and the moon were friends.

b) The moon could count his friends.

c) Pears are violet.

d) Moon called upon his fairy godmother.

e) Many stars are bigger than sun.

f) The grass has small flowers.

SECTION (B)

Q4) Circle the doing words.

(1x5=5)

a) Tia runs on the road.

b) She works very hard.

c) Ben draws beautiful paintings.

d) She eats her dinner at 8 pm.

e) Ray rides his bicycle carefully.

Q5) Choose the right word.

(1x5=5)

- a) They **had/has** a red bicycle last year.
- b) I **has/have** a beautiful dress.
- c) She **have/had** an exam last Monday.
- d) My father **had/has** an expensive phone.
- e) Last evening I **has/had** high fever.

Q6) Fill in the blanks with was/were.

(1x5=5)

- a) Ayaan _____ present yesterday.
- b) They _____ playing cricket in the evening.
- c) Those shoes _____ clean.
- d) It _____ raining last night.
- e) Tia and Dia _____ best friends.

Q7) Use the words in the brackets to talk about past.

(1x5=5)

- a) He _____ (visit) museum with his school.
- b) I _____ (help) my mom in the kitchen.
- c) Sam _____ (work) hard for his exam.
- d) Tina and Rina _____ (play) basketball yesterday.
- e) My sister and I _____ (cook) our own food..

Q8) Write five lines on My Favourite Festival.

(5)

सेंट. पी. बी. एन. पब्लिक स्कूल, गुरुग्राम
इकाई परीक्षा : IV
कक्षा : पहली
विषय : हिंदी
Sample Paper

समय: 2 घंटे

अंक: 40

नाम: _____

अनुक्रमांक: _____

सामान्य निर्देश:

1. सभी प्रश्नों के उत्तर देना अनिवार्य है।
2. लेख और वर्तनी का ध्यान रखें।
3. प्रश्नों को ध्यान से पढ़कर उत्तर दीजिए।

प्रश्न 1. सही विकल्प चुनें।

(1×5=5)

(क) कुत्ता अपनी रोटी भी क्यों गँवा बैठा ? क्योंकि

(i) वह लालच में आ गया था () (ii) वह मूर्ख था ()

(ख) चूहे ने चींटियों का खाना कब खाना शुरू कर दिया ?

(i) जब चींटियों ने खाने का काफी सामान जुटा लिया था ()

(ii) जब चींटियाँ बाहर खाना लेने जाती थी ()

(ग) चूहे ने किस से माफ़ी मांगी ?

(i) बिल्ली से () (ii) चींटियों से ()

(घ) रोटी पानी में कब गिर गई ?

(i) जब वह भौंका () (ii) जब उसने अपनी परछाई देखी ()

(ङ) तालाब के पास वाली जगह कुत्ते को क्यों ठीक लगी ?

(i) वहाँ पानी भी था () (ii) वहाँ दूसरा कुत्ता भी था ()

प्रश्न 2. सही वाक्य पर सही (✓) तथा गलत वाक्य पर गलत (X) का निशान लगाइए।

(1×4=4)

(क) चींटियों को बरसात आने से पहले खाना इकट्ठा करना था। ()

(ख) चींटियाँ दिन भर काम करती और रात को आराम करती। ()

(ग) चूहे ने नीचे ही नीचे चींटियों के बिल तक रास्ता बना लिया था। ()

(घ) बिल्ली जब चूहे के बिल के पास गई तो चूहा चींटियों का खाना चट कर रहा था। ()

प्रश्न 3. सही विकल्प चुनकर रिक्त स्थान भरें।

(1x5=5)

(छीननी , की खोज में , अरे वाह , पर भौंका , झाँका)

(क) कुत्ता खाने _____ घूम रहा था।

(ख) वह पानी में दिख रहे कुत्ते _____।

(ग) जैसे ही उसने पानी में _____ उसे दूसरा कुत्ता दिखा।

(घ) _____ ! मज़ा आ गया।

(ङ) किसी तरह दूसरे कुत्ते से रोटी _____ चाहिए।

प्रश्न 4. निम्नलिखित शब्दों के अर्थ लिखिए।

(1x4=4)

(क) मूर्ख - _____

(ख) मजा चखाना - _____

(ग) गुर्राहट - _____

(घ) विनती - _____

प्रश्न 5. निम्नलिखित प्रश्नों के उत्तर लिखिए।

(2x3=6)

(क) कुत्ता सुनसान तालाब की ओर क्यों दौड़ पड़ा ?

(ख) पहले चूहे की सलाह राजा ने क्यों नहीं मानी ?

(ग) चींटियाँ क्या सोचकर खुश थीं ?

प्रश्न 6. अनेक शब्दों के लिए एक शब्द लिखिए।

(1×6=6)

(क) पहरा देने वाला - _____

(ख) बहुत बोलने वाला - _____

(ग) सच बोलने वाला - _____

(घ) शहर में रहने वाला - _____

(ङ) जो कभी न मरे - _____

(च) लिखने वाला - _____

प्रश्न 7. विलोम शब्द लिखिए।

(1×5=5)

(क) ठंडा - _____

(ख) बड़ा - _____

(ग) सुख - _____

(घ) सरल - _____

(ड) सुबह - _____

प्रश्न 8. निम्नलिखित शब्दों के लिंग बदलकर लिखिए।

(1×5=5)

(क) लड़का - _____

(ख) बेटा - _____

(ग) बकरा - _____

(घ) मामा - _____

(ङ) बैल - _____

St. PBN PUBLIC SCHOOL
UNIT TEST – IV
CLASS – I
MATHEMATICS
SAMPLE PAPER

TIME: 2 Hours

MM-50

GENERAL INSTRUCTIONS:

1. All questions are compulsory.
2. Read each question carefully.

NAME: _____

ROLL NO: _____

1. Tick the correct answer

(1x10=10)

(i) 3,6,9,12,15.....are in pattern

(a) yes

(b) no

(ii) 371,372,373, 374,_____.

(a) 375

(b) 325

(iii) 390 comes after

(a) 389

(b) 399

(iv) Tick the correct value of the money.



(a) 22

(b) 20

(v) $5 \times 2 =$ _____

(a) 6

(b) 10

(vi) The second month of the year is

(a) January

(b) February

(vii) ₹1 + ₹1 =

(a) ₹1

(b) ₹ 2

(viii) Find the missing numbers in the pattern 5, ____, 15, 20, 25.

(a) 10

(b) 40

(ix) $4+4+4+4+4=$

(a) 20

(b) 28

(x) The repeated arrangement of colours is called _____ pattern

(a) colour


(b) shape

2. Solve the following:

(2×5=10)

(i) Write the multiplication facts for the given groups.

(a) _____ × _____ = _____.



(ii) What comes next in the number pattern?

6, 12, 18, _____, _____

(iii) Multiply:

(a) 2 groups of 7

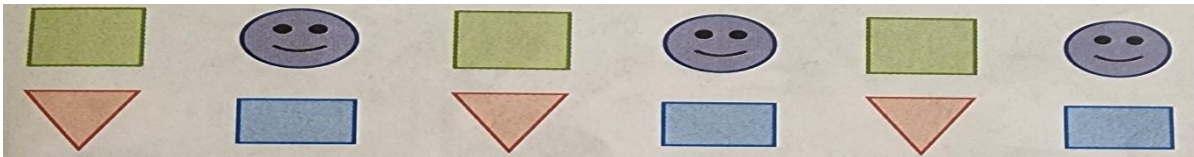
(b) 4×9

(iv) Fill in the blanks:

(a) 415, _____, 417, _____

(b) 620, _____, 622, _____

(v) Draw next two shapes of the pattern:



3. Write the number names of the following:

(1×5=5)

(i) 164 = _____

(ii) 182 = _____

(iii) 169 = _____

(iv) 170 = _____

(v) 195 = _____

4. Word problems.

(2×3=6)

(i) Ravi has 20 rupees. His mother gives him 15 more rupees. How much money does Ravi have now?

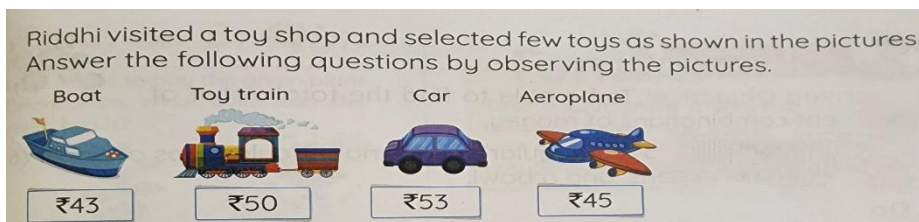
(ii) There are 4 flower pots. Each pot has 5 flowers. How many flowers are there in total?

Ans. Number of flower pots =

Number of flowers =

Total flowers =

(iii) Riddhi visited a toy shop and selected few toys as shown in the pictures answer the following questions by observing the pictures



- Which toy is the cheapest?
- Which toy is the costliest?

5. Dodging of tables:

(1×5=5)

(i) $3 \times 4 =$ _____

(ii) $7 \times 6 =$ _____

(iii) $5 \times 9 =$ _____

(iv) $2 \times 2 =$ _____

(v) $4 \times 4 =$ _____

6. State True or False.

(1x5=5)

(i) A ₹2 coin is more than a ₹1 coin. _____

(ii) ₹60+₹20=80. _____

(iii) 6 groups of 3 is equal to 15. _____

(iv) coins are made of plastic. _____

(v) 2,4,6,8,10 are in pattern. _____

7. Fill in the blanks –

(1x5=5)

(i) _____ is used to buy things.

(ii) 478,477,476, _____

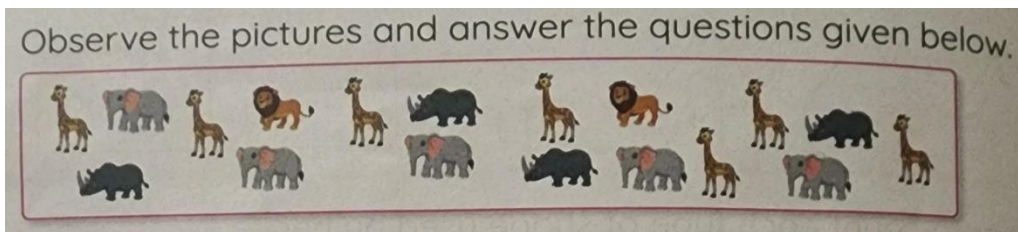
(iii) a,b,c,d, _____.

(iv) $3 \times 2 = \underline{\quad} = 2 \times 3$

(v) 7,77,777, _____

8. Case based questions:

(1x4=4)



1. How many elephants are there?

2. How many lions are there?

3. How many more giraffes are there than lions?

4. How many fewer hippopotamus are there than elephants?

St. PBN PUBLIC SCHOOL
UNIT TEST – IV
CLASS – I
EVS
SAMPLE PAPER

TIME: 2 Hours

MM-40

GENERAL INSTRUCTIONS:

- 3. All questions are compulsory.**
- 4. Read each question carefully.**

NAME: _____

ROLL NO: _____

1. Tick the correct answer :

(1x10=10)

(i) _____ part of the plant grows under the soil.

(a) Root

(b) Leaf

(ii) _____ is known as the "King of the Jungle".

(a) Lion

(b) Tiger

(iii) _____ is a source of water.

(a) Sun

(b) River

(iv) _____ plant has thorns.

(a) Rose

(b) Banana

(v) _____ covers most of the Earth's surface.

(a) Water

(b) land

(vi) _____ is needed for a boat to float?

(a) Air

(b) water

(vii) _____ plant is very big.

(a) Neem tree

(b) Grass

(viii) The Sun rises in the _____

(a) East

(b) West

(ix) What helps clothes dry in the sun?

(a) Air

(b) Water

(x) we see _____ in the sky when it rains.

(a) Rainbow

(b) Moon

2. Write True or False:

(1×5=5)

(i) We drink water from the sea _____.

(ii) Earth has no air and water _____.

(iii) We should store rain water for later use _____.

(iv) Trees are tall big and strong plants _____.

(v) Home Of dog is a cave _____.

3. Fill in the blanks.

(1×5=5)

Anthill	Sun	Soft	Dirty	Stars
---------	-----	------	-------	-------

(i) _____ air is bad for us.

(ii) When it is day ,we see the bright and beautiful _____.

(iii) Herbs are small and usually have a _____ green stem.

(iv) At night, we see the moon shining along with countless twinkling _____.

(v) A home made for ants _____.

4. Answer the following questions in brief.

(2×3=6)

(i) Name 2 animals that live on land.

(ii) What is a storm?

(iii) Name 2 flowering plants that you see around.

5. Match the following.

(1×5=5)

(i) Moon

pet

(ii) Dog

sky

(iii) Spinach

drink

(iv) Water

rain

(v) Dark clouds

herb

6. Name the following –

(1x5=5)

(i) Name one plant that give us fruits. _____

(ii) Name the natural satellite of the Earth. _____

(iii) Name the planet we live on. _____

(iv) Methi is an example of which type of plant? _____

(v) Name the star that gives us light and heat. _____

7. Case based questions:

(4)

A little girl named Meera went to the zoo with her parents. She saw different kinds of animals. Some were big, like the elephant, and some were small, like the rabbit. She noticed that some animals lived in water, like the fish, while others lived on land, like the lion. She also saw birds flying in the sky. Meera was very excited to learn about animals.

1. What do fish use to swim in water?

2. Which animal makes a roaring sound?

3. Which animal in the story has long ears?

4. Name one big animal that Meera saw at the zoo.

St. PBN PUBLIC SCHOOL, GURUGRAM
UNIT TEST- IV
CLASS - I
SUBJECT – COMPUTER
Sample Paper

TIME: 1 Hour

MM: 20

GENERAL INSTRUCTIONS:

1. All questions are compulsory.
2. Read each question carefully.

NAME: _____

ROLL NO: _____

1. Tick the correct answer.

(0.5x5=2.5)

a) A computer does the task by the _____ given by us.

- i. Books ii. Pictures iii. Data

b) You can keep _____ in the cupboard.

- i. Water ii. Clothes iii. Pen

c) The _____ is used to store data in computer.

- i. Refrigerator ii. Data iii. Hard disk

d) _____ is the area where blocks are kept together to create a script.

- i. Blocks palette ii. Coding area iii. Stage

e) The _____ is the area where blocks are kept together to create a script.

- i. Blocks palette ii. Coding Area iii. Stage

2. Fill in the blanks:

(0.5x5=2.5)

(Sprite, refrigerator, own, stage, Mouse)

a) _____ is the main character that performs action.

b) You can keep vegetables and fruits in the _____

c) A computer does not work on its _____

d) The sprite moves on the _____

e) _____ is used to click something on a monitor.

- 3. State the following statements as True or False (1x5=5)**
- a. We cannot save our drawing in computer. _____
 - b. CD is used to store games. _____
 - c. The green flag is used to play a script _____
 - d. The sprite is the main character of scratch. _____
 - e. We need to give instructions to computer. _____

4. Answer the following questions in one word: (1x4=4)

a) What is Data?

b) Name any one storage device.

c) Name the main space where the action takes place in the project.

d) Name the sign that is used to play any script.

5. Write the full form of following- (1X2=2)

1. **CD** _____

2. **PD** _____

6. Case study based questions-

(1X4=4)

a. Name the following pictures-

