

ST. PBN PUBLIC SCHOOL, GURUGRAM
SAMPLE PAPER
CLASS – III
ENGLISH

TIME: 2 Hours

MM: 40

NAME: _____ ROLL NO: _____

GENERAL INSTRUCTIONS:

1. All questions are compulsory.
2. Read each question carefully.

Section (A) [Comprehension]

Q1) Read the passage and answer the questions. (1x5=5)

Sarah loved baking cookies. Every weekend, she would put on her apron and gather the ingredients to create delicious treats. One sunny morning, Sarah's mom announced that they would be hosting a bake sale to raise money for local charity. Sarah was thrilled and couldn't wait to showcase her baking skills.

a) What did Sarah love to do?

b) What did she do on every weekend?

c) What did her mom announced?

d) What is the opposite of showcase?

e) Why was Sarah thrilled?

Section (B)

Q2) Fill in the blanks.

(0.5x4=2)

a) Mr. Oats was the owner of _____.

b) I can get through a doorway without any _____.

c) Bismu walked _____ miles to his school.

d) The animals are afraid of the _____.

Q3) Answer the following questions.

(1x4=4)

a) Bismu kept the kid carefully with him even when his own life was in danger. What does this show about his character?

b) How did Sanjay's father and the villagers finally save Bismu?

c) Which animals were there at the farm?

d) Which competition did the children enter? Who won the competition?

Q4) Case Based Questions

(2x2=4)

I can drive storm clouds and shake tall towers,
Or steal through a garden and not wake the flowers.

a) Name the poem and the poet?

b) What can the wind do when its quiet?

Section (C)

Q5) Complete using is, am, are. (0.5x2=1)

- a) My grandfather _____ going to Maha-Kumb.
- b) Where _____ the sheets I gave you last evening?

Q6) Fill in the blanks with was, were. (0.5X4=2)

- a) It _____ raining yesterday.
- b) The children _____ playing in the park.
- c) You _____ not sleeping right.
- d) I _____ at home when she came.

Q7) Fill in the blanks with has, have, had. (1x3=3)

- a) I _____ a really bad headache.
- b) Jack _____ brought vegetables last weekend.
- c) He _____ a bad habit of wasting food.

Q8) Fill in the blanks with simple present tense. (1x3=3)

- a) Shaila _____ her teeth daily. (brush)
- b) The soldier _____ bravely. (fight)
- c) We _____ vegetables on our rooftop. (grow)

Q9) Complete the sentences using is, am, are + ing form of the verb.

(1x3=3)

- a) Janny _____ a red bag. (draw)
- b) Sumy and Ana _____ each other for their homework. (help)
- c) I _____ to the market with my mother. (go)

Q10) Add -d or -ed to the words in the brackets. (1x3=3)

- a) Arzi _____ up very high. (jump)
- b) We _____ to music yesterday morning. (listen)
- c) My mom _____ a cake for us. (bake)

Q11) Add will and rewrite the sentences. (1x3=3)

- a) We paint our house next week.

- b) They be here in two hours.

- c) He call you tomorrow.

Q12) Fill in the blanks with can, cannot, should, should not. (0.5x6=3)

- a) Look! It's right here. You _____ come here.
- b) You _____ leave for school without breakfast.
- c) You _____ eat healthy food, you _____ eat junk food.
- d) I think we _____ reserve our holiday in advance.
- e) You _____ watch TV all the time.

सेंट पी० बी० एन० पब्लिक स्कूल ,गुरुग्राम

इकाई परीक्षा - 4 (2024-25)

कक्षा : तीसरी

विषय : हिंदी (आदर्श प्रश्न पत्र)

समय : 2 घंटे

अंक : 40

सामान्य निर्देश :

- 1 सभी प्रश्नों के उत्तर देना अनिवार्य है।
- 2 लेख और वर्तनी का ध्यान रखें।
- 3 प्रश्नों को ध्यान से पढ़कर उत्तर दीजिए।

भाग क

प्रश्न 1: निम्नलिखित गद्यांश को पढ़कर पूछे गए प्रश्नों के उत्तर लिखिए ।

(1×5=5)

एक बार एक जंगल में शेर, हाथी, और खरगोश रहते थे। शेर जंगल का राजा था। वह सभी जानवरों की मदद करता था। एक दिन एक हिरण बहुत परेशान था। शेर ने पूछा, "तुम परेशान क्यों हो?" हिरण ने बताया कि उसकी छोटी बच्ची खो गई है। शेर ने तुरंत सभी जानवरों को बुलाया और कहा, "हमें मिलकर हिरण की बच्ची को ढूंढना है।" सभी जानवर मदद के लिए तैयार हो गए। कुछ देर बाद खरगोश ने देखा कि हिरण की बच्ची एक झाड़ी के पास खेल रही थी। उसने सभी को खबर दी। हिरण बहुत खुश हुआ और शेर को धन्यवाद दिया।

1. जंगल का राजा कौन था?
(क) शेर
(ख) हाथी
(ग) खरगोश
2. हिरण क्यों परेशान था?
(क) उसकी बच्ची खो गई थी
(ख) वह बीमार था
(ग) उसे खाना नहीं मिला
3. हिरण की बच्ची कहां मिली?
(क) पेड़ के पास
(ख) झाड़ी के पास
(ग) नदी के पास
4. हिरण ने किसे धन्यवाद दिया?
(क) खरगोश को
(ख) शेर को
(ग) हाथी को
5. शेर ने खरगोश से क्या पूछा?
(1) तुम्हारा नाम क्या है?
(2) तुम परेशान क्यों हो?

(3) तुम कहाँ जा रहे हो?

प्रश्न 2: निम्नलिखित प्रश्नों के उत्तर दीजिए।

(0.5×4=2)

(क) किसकी जीभ उसकी लंबाई से दोगुनी लंबी होती है?

उत्तर: _____

(ख) पेड़ों के उपकार के बदले में हम क्या करते हैं?

उत्तर: _____

(ग) राजा को पानी किसने पिलाया?

उत्तर: _____

(घ) कोयले पर तेल डालते ही क्या हुआ?

उत्तर: _____

प्रश्न 3: निम्नलिखित वाक्य में सही वाक्य पर सही (✓) का और गलत वाक्य पर गलत (✗) का चिन्ह लगाए।

(0.5×4=2)

(1) शेर केवल दो साल की उम्र तक दहाड़ सकते हैं। ()

(2) पेड़ देश की बहुमूल्य संपत्ति है। ()

(3) चबूतरे पर राजा नीम पेड़ की छाँव में बैठा था। ()

(4) बचपन से ही ग्लेन को दौड़ का शौक था। ()

प्रश्न 4: निम्नलिखित प्रश्न के उत्तर दीजिए।

(2×3=6)

(1) मनुष्य को जानवरों का ध्यान क्यों रखना चाहिए?

उत्तर: _____

(2) पेड़ों को बचाना क्यों ज़रूरी है?

उत्तर: _____

(3) दरबारियों ने किन-किन चीजों को कीमती बताया?

उत्तर: _____

प्रश्न 5: रिक्त स्थान भरिए।

(0.5×5=2.5)

(क) ----- सुबह उठते ही काम में लग जाती हैं।

(ख) ----- पक्षी उड़ नहीं सकता।

(ग) ----- नहीं मिली तो जिंदगी कैसे चलेगी?

(घ) बहुत समय पहले जयपुर में राजा ----- का शासन था?

(ङ) ----- और पक्का इरादा हो तो कुछ भी असंभव नहीं होता।

प्रश्न 6: निम्नलिखित शब्दों के अर्थ लिखिए।

(0.5×5=2.5)

(क) उत्साहित _____ (ख) संकोच _____

(ग) गृह-कार्य _____ (घ) उपाधि _____

(ड) प्राण -वायु _____

भाग 2 (व्याकरण)

प्रश्न 7: निम्नलिखित शब्दों के विलोम शब्द लिखिए।

(0.5×6=3)

- (i) चढ़ना _____ (iv) पराजय _____
(ii) हँसना _____ (v) आकाश _____
(iii) सोना _____ (vi) कच्चा _____

प्रश्न 8: निम्नलिखित अनेक शब्दों के लिए एक शब्द लिखें।

(1×4=4)

- (क) जो सोने के गहने बनाता है। _____
(ख) जो वर्ष में एक बार हो। _____
(ग) जो दूसरे देश का हो। _____
(घ) जो महीने में एक बार हो _____

प्रश्न 9: निम्नलिखित शब्दों के दो-दो पर्यायवाची शब्द लिखिए।

(1×4=4)

- (क) ईश्वर _____
(ख) बगीचा _____
(ग) दोस्त _____
(घ) आँख _____। _____

प्रश्न 10: गिनती को शब्दों में लिखिए

(0.5×8=4)

- (i) 87 _____ (v) 71 _____
(ii) 92 _____ (vi) 75 _____
(iii) 82 _____ (vii) 77 _____
(iv) 99 _____ (viii) 80 _____

प्रश्न 11: छुट्टी के लिए प्रधानाचार्या को प्रार्थना पत्र लिखिए।

(5)

St. PBN PUBLIC SCHOOL
UNIT TEST – IV
CLASS – III
MATHEMATICS
SAMPLE PAPER

TIME: 2 Hours

MM-50

NAME: _____ ROLL NO: _____

GENERAL INSTRUCTIONS:

1. All questions are compulsory.
2. Read each question carefully.

1. Tick the correct answer

(1x10=10)

(i) 7 times 13 makes:

- (a) 91 (b) 60

(ii) What is the time 30 minutes before 12:00 noon?

- (a) 11:30am (b) 12:30pm

(iii) 875 paise can also be written as

- (a) ₹8.75
(b) ₹23.4

(v) _____ tells the number of items each symbol stands for

- (a) key (b) symbols

(v) PM means _____

- (a) post meridiem (b) partial medium

(v) Five 50 -rupees notes make

- (a) ₹ 100 (b) ₹250

(vii) 10 minutes past 3 is

- (a) 3:10 (b) 3:55

(viii) $10 \times 10 = 10 \times 10 =$ _____

- (a) 24 (b) 100

(ix) 1 minute _____

(a) 60 minutes

(b) 60 seconds

(x) $15 \times 5 = \underline{\quad}$

(a) 75

(b) 91

2. Mental Maths:

(1x10=10)

(i) Put "<, >" or "=" in the blanks:

(a) 7×4 _____ 9×3 .

(b) ₹2 _____ 150p + 120p

(ii) Fill in the blanks:

(a) Am represents _____.

(b) $\frac{5}{6}$ of 54 seconds is _____.

(c) _____ explains What information a pictograph is depicting.

(d) ₹555 = _____ paise .

(e) $11 \times$ _____ = 110

(f) 5:30pm + 3 hours = _____

(g) $6 \times 6 =$ _____

(h) Quarter past to 7 = _____

3. Solve the following as instructed:

(2x10=20)

(i) Subtract the following.

(a) ₹23.05 from ₹76.56

(b) ₹12.65 from ₹56.76

(ii) Answer the following:

(i) Write today's date in the format dd.mm.yyyy. _____

(ii) Which month is 3 months after the current month? _____

(iii) Convert the following into paise.

(a) ₹67 _____



(b) ₹456 _____

(iv) Multiply:

$$231 \times 12$$

(v) Count the birds and draw tally marks to show the count




	Birds	Tally marks	Number of birds
a.			
b.			

(vi) Divide and check your answer:

$$981 \div 3$$

(vii) Mahesh and his friends are watching a movie that will end at 7:10 pm. The duration of the movie is 2 hours .When did the movie start?

(viii) Write the number shown by tally marks in each questions:

a.  .

b. 

(ix) Add:

$$4563 + 2344 + 1245 + 7654$$

(x) Write the following in words.

(a) ₹78.67

(b) ₹564.45

4. Word problems.

(6)

(i) On onam ,45 boats participated in a boat race. Each boat carries 14 people. How many people are there in 45 such boats?

(ii) Namita has six 100-rupee notes,three 20-rupee notes and ten 10 -rupee coins in her wallet .She purchased a chocolate for ₹20 and 5 water bottles of ₹20 each .How much money is left with her ?

(iii) Rohan has 140chocolates. He wants to distribute them equally among his 14 friends.How many chocolates will each friend get?

Case based questions:

A school organized a book-reading challenge where students had to read books in a month. The data below shows the number of books read by students in different classes:

Class	Number of Books Read
Class 1	15
Class 2	20
Class 3	25
Class 4	18
Class 5	22

Questions:

(a) Which class read the most books? How many more books did they read than Class 1?

(b) Find the total number of books read by all the classes together.

(c) If Class 2 together read 10 more books next month, how many books will they have read in total?

(d) Find the total number of books read by class 1, class 3 and class 5 altogether.

St. PBN PUBLIC SCHOOL, GURUGRAM

UNIT TEST IV
CLASS - III
EVS
(SAMPLE PAPER)

Time: 2 Hours

MM-40

GENERAL INSTRUCTIONS:

1. All questions are compulsory.
2. Read each question carefully.

NAME: _____ ROLL NO: _____

1. Name the following questions in one word. (1x4=4)

- a) A plant that stores water in its thick fleshy stems. _____
- b) When water vapour changes into ice. _____
- c) A substance used to change the colour of the cloth. _____
- d) A Performer who tell stories without speaking. _____

2. Fill in the blanks. (1x5=5)

- a) Water that is fit for drinking is called _____.
- b) Some women wear a _____ to cover their heads.
- c) With time symbols developed into _____.
- d) Vehicles that move on land are called means of _____.
- e) TV are an example of _____ communication.

3. State whether the following statements are 'True' or 'False': (1x5=5)

- a) Letters can be sent by air transport _____
- b) Telephone is the means of mass communication _____
- c) Climate has no effect on the choice of our clothes _____
- d) We use internet to send messages. _____

e) Metro is the means of road transport

4. Tick the correct answer:

(1x5=5)

1. Which of these helps us to carry people and goods?

- a) Police Van
- b) Pipeline
- c) Car
- d) Train

2. What do we use for water transport?

- a) Ships
- b) Steamers
- c) Tankers
- d) All of the above

3. Which of the following is an example of a mass media?

- a) Train
- b) Mobile
- c) Sign language
- d) Radio

4. On which device internet can be used?

- a) Radio
- b) TV
- c) Laptops
- d) Fax Machine

5. Which of the following animals are used in hilly regions for travelling?

- a) Mules
- b) Elephants
- c) Camels
- d) Bulls

5. Define the following terms:

(2x4=8)

a) Veil

b) Special Vehicle:

c) Sign Language:

d) Clouds:

6. Answer the following questions.

(3×3=9)

a) What is tie and die printing?

b) How can we send letters outside India?

c) What are helicopters used for?

7. Water is a colorless, tasteless, and odorless liquid. It is essential for all living things. Water can exist in three forms: solid (ice), liquid (water), and gas (steam or water vapor). It takes the shape of the container it is poured into. Water is also a universal solvent, which means it can dissolve many substances.

Questions:

a. In how many forms does water exist?

b. What is the taste of water?

c. What happens when water is poured into a container?

d. Why is water called a universal solvent?

St. PBN PUBLIC SCHOOL, GURUGRAM
UNIT TEST- IV
CLASS - III
SUBJECT – COMPUTER
SAMPLE PAPER

TIME: 1 Hour

MM: 20

GENERAL INSTRUCTIONS:

1. All questions are compulsory.
2. Read each question carefully.

NAME: _____

ROLL NO: _____

1. Tick the correct answer.

(0.5x5=2.5)

- a) To move a block of commands anywhere in the Scripts area, click on the _____
block of the script.
- i. Top ii. Bottom iii. Left
- b) The [say hello!] block allows the sprite to say something in a speech _____
- i. Cloud ii. Bubble iii. Circle
- c) _____ gives facility to shop online-
- i. E-mail ii. Facebook iii. Myntra
- d) Each website is identified by its unique address, which is known as the _____
- i. URL ii. PLC iii. HPP
- e) _____ program helps in accessing the entire information on the web.
- i. Web browser ii. Hyperlink iii. Hypertext

2. Fill in the blanks:

(0.5x5=2.5)

(homepage, digital citizen, website, cat, Myntra)

- a) The first page of any website is known as _____
- b) A good _____ refers to a person who uses the internet safely and in the right way.
- c) A _____ is a collection of related web pages linked to one another.
- d) The default sprite in scratch is _____

e) _____ is one of the most popular shopping sites.

3. State the following statements as True or False - (0.5x6=3)

a. The sound blocks are used to play sounds in the Scratch project. _____

b. You can repeat the actions of a sprite as many time as needed. _____

c. Computers that are connected to the internet are prone to virus attacks. _____

d. The stop button is red in colour. _____

e. You cannot change the size of a sprite. _____

f. Internet provides facility for online booking of tickets. _____

4. Answer the following questions in one word or one sentence: (1x4=4)

a) Name the block that is used to run the script again and again.

b) Name the block that you use to chooses the costume of sprite.

c) What is the full form of ARPANET?

d) Name any two online shopping sites.

5. Answer the following questions- (2x2=4)

a. What do you understand by a webpage?

b. Which block is used to play drum sound? How can you access it?

6. Case study based questions-

a. Answer the following-

(1x2=2)

1. Shivan wants to stop the scratch project before it ends. Suggest the correct button for her to use to stop the scratch project at any time during the execution.

2. Suhani is having an account on a social networking website. She is continuously getting harmful comments from an unknown person. What should be her immediate action.

b. Match the following-

(0.5x4=2)

1. Default character of scratch



2. Event block



3. A social networking site



4. A web browser

