

**ST. PBN PUBLIC SCHOOL, GURUGRAM**  
**UNIT TEST-IV**  
**CLASS – IV**  
**ENGLISH**  
**SAMPLE PAPER**

**TIME: 2 Hours**

**MM: 40**

**NAME:** \_\_\_\_\_

**ROLL NO:** \_\_\_\_\_

**GENERAL INSTRUCTIONS:**

1. All questions are compulsory.
2. Read each question carefully.

**Section (A) [Comprehension]**

**Q1 Read the unseen passage and answer the questions given below. (5)**

In a small town, there was a library filled with books of all kinds. Children loved to visit the library after school. Among them was a girl named Mia, who adored reading. Every time she opened a book, she felt like she was entering a new world.

One day, Mia found an old book hidden in a corner. It was dusty and looked forgotten. Curious, she took it home and began to read. The story was about a brave knight who went on adventures to save his kingdom. Mia was captivated! She read late into the night, imagining herself as the knight.

From that day on, Mia visited the library every week, discovering new stories and making friends with other young readers. She realised that reading not only entertained her but also helped her learn about different cultures and ideas.

1. What did Mia love to do?
2. What did Mia find in the library?
3. What was the story about that Mia read?
4. How did reading make Mia feel?
5. What did Mia realise about reading?

**Section –B(Reader)**

**Q2). Answer the following questions.**

**(1x3=3)**

- a) Does the boy actually sail over the sea?
- b) Why did the owls put the condition that the boy had to be kept in kiva?
- c) Was the willow tree trying to avoid giving help to the bird? What do you think?

**Q3.) Fill in the blanks.****(0.5x4=2)**

- a) The boy's parents sit at home \_\_\_\_\_.
- b) The little boy wanted a \_\_\_\_\_.
- c) The family was \_\_\_\_\_ and they could hardly feed themselves.
- d) The \_\_\_\_\_ left the spruce, pine, and the juniper tree alone.

**Q4) Write the meaning of the following words.****(0.5x4=2)**

- a) lit
- b) prowled
- c) acorns
- d) produce

**Q5) Case Based Question**

These are the hills, these are the woods, these are my starry solitudes; and their the river by whose brink. The roaring lions come to drink.

Q1) Name the poem and the poet. **(2)**

Q2) What does the poem tell us about the boy. **(1)**

**Section – C (Grammar)****Q6) Fill in the blanks with was/were.****(0.5x4=2)**

Our solar system \_\_\_\_\_ formed billions of years ago. The planets and satellites \_\_\_\_\_ hot gaseous masses. The Sun \_\_\_\_\_ the richest source of energy in the solar system. When looking down from the above of the sun's north pole, the planets \_\_\_\_\_ orbiting in a counter-clockwise direction.

**Q7) Fill in the blanks with the correct form of verb.****(0.5x4=2)**

- a) The birds \_\_\_\_\_(drink) water.
- b) We \_\_\_\_\_(drive) to the beach last Sunday.
- c) The engineer \_\_\_\_\_ (work) hard on that rocket last year.
- d) Romola \_\_\_\_\_(play) the piano every day.

**Q8) Fill in the blanks with the suitable adverbs.****(1x4=4)**

- a) Supriya runs \_\_\_\_\_.
- b) I have \_\_\_\_\_ been to France.
- c) They built a house \_\_\_\_\_.
- d) It has to be done \_\_\_\_\_.

**Q9) Fill in the blanks with the comparative or superlative forms of adverbs in the brackets. (1x4=4)**

- a) My house is the \_\_\_\_\_ in the neighbourhood. (large)
- b) Out of all the boys, James speaks English \_\_\_\_\_. (fluently)
- c) This child is \_\_\_\_\_ than his sibling. (brave)
- d) This time, I have studied \_\_\_\_\_ than the last time. (seriously)

**Q10) Join these pairs of sentences using and, or, but, because. (1x4=4)**

- a) June ate a sandwich. June drank coffee.
- b) Is that a cheetah? Is that a leopard?
- c) I looked for the key. I could not find it.
- d) We could not see anything. It was dark.

**Q11) Fill in the blanks with suitable preposition. (1x4=4)**

- a) I reached office \_\_\_\_\_ 10 am.
- b) He lives \_\_\_\_\_ his grandmother.
- c) They hung my coat \_\_\_\_\_ the door.
- d) Mum is \_\_\_\_\_ the kitchen baking a cake.

**Section – D (Writing Skill)**

**Q12) Write a notice on informing about the Electricity Cut. (5)**

सेंट. पी. बी. एन. पब्लिक स्कूल, गुरुग्राम  
इकाई परीक्षा : IV  
कक्षा : चौथी  
विषय : हिंदी  
Sample Paper

समय: 2 घंटे

अंक: 40

नाम: \_\_\_\_\_

अनुक्रमांक: \_\_\_\_\_

सामान्य निर्देश:

1. सभी प्रश्नों के उत्तर देना अनिवार्य है।
2. लेख और वर्तनी का ध्यान रखें।
3. प्रश्नों को ध्यान से पढ़कर उत्तर दीजिए।

**भाग - क**

**साहित्य**

**प्रश्न 1. निम्नलिखित गद्यांश को पढ़कर प्रश्नों के उत्तर दीजिए।**

**(1 x 5 = 5)**

दीवाली का त्यौहार था। राधा नए और सुंदर कपड़े पहनकर अपने मम्मी- पापा के साथ बाजार जाने को तैयार थी। आज उसे बड़ा अच्छा लग रहा था। दीवाली पर उसे जलते दीपक, जगमगाते कंदील, घूमती फिरकी, आवाज करते पटाखे बहुत अच्छे लंगते थे। शाम को गणेश - लक्ष्मी की पूजा करते थे। दुकानदारों ने बाजार को अच्छी तरह से सजा रखा था। राधा की निगाह एक आदमी पर गई। उसने अपने हाथों में तीन चार पिंजरे ले रखे थे।

**i) राधा ने कैसे कपड़े पहन रखे थे?**

क) फटे हुए

ख) नए और सुंदर

**ii) शाम को किसकी पूजा करते थे?**

क) लक्ष्मी की

ख) गणेश - लक्ष्मी की

**iii) क्या अच्छी तरह सजा हुआ था?**

क) घर

ख) बाजार

**iv) राधा की नज़र किस पर गई?**

क) फिरकी पर

ख) एक आदमी पर

**v) उस आदमी के हाथ में क्या थे?**

क) पिंजरे

ख) पंछी

प्रश्न 2. सही वाक्य पर सही (✓) तथा गलत वाक्य पर गलत (X) का निशान लगाइए।

(0.5x4=2)

- (क) किसान के बेटे को घोड़ी पर काठी कसने में सफलता नहीं मिली। ( )  
(ख) किसान के घोड़े का नाम हिमानी था। ( )  
(ग) मास्टर जी ने समीर के पिता जी को उसे स्कूल से निकालने को कहा। ( )  
(घ) अनंत की माँ खेतों में काम करती थी। ( )

प्रश्न 3. रिक्त स्थान भरिए।

(0.5 x 5 = 2.5)

- (क) \_\_\_\_\_ सुश्रुत के पास उनसे सेवा लेने नहीं, बल्कि उनके दर्शन करने आए थे।  
(ख) किसान \_\_\_\_\_ था।  
(ग) राजा के सैनिकों को \_\_\_\_\_ नौजवानों की जरूरत नहीं थी।  
(घ) कभी – कभी शरारत \_\_\_\_\_ भी बन जाती थी।  
(ङ) कवि ने सूरज को \_\_\_\_\_ के समान बताया है।

प्रश्न 4. निम्नलिखित शब्दों के अर्थ लिखिए।

(0.5 x 5 = 2.5)

अखाड़ा, उषा, इच्छा, एहसास, रणक्षेत्र

प्रश्न 5. निम्नलिखित प्रश्नों के उत्तर एक वाक्य में लिखिए।

(0.5 x 4 = 2)

- (क) किसान के बेटे ने घोड़े का नाम श्यामकर्ण क्यों रखा ?  
(ख) सुश्रुत कौन थे ?  
(ग) सूरज ने सबसे पहले किसको सजाया ?  
(घ) अनंत ने समीर का साथ देने से क्यों मना कर दिया ?

प्रश्न 6. निम्नलिखित प्रश्नों के उत्तर लिखिए।

(2 x 3 = 6)

- (क) 'लाल चादर' कवि ने किसे और क्यों कहा है ?  
(ख) हिमानी का स्वभाव कैसा था ? उसका नाम हिमानी क्यों रखा गया ?  
(ग) सुश्रुत के चेहरे पर निराशा के बादल कब छाए ?

भाग - ख

व्याकरण

प्रश्न 7. निम्नलिखित शब्दों के वचन बदलिए।

(0.5x6=3)

वधु, रोटी, छात्र, कहानी, कक्षा, बाला

**प्रश्न 8. रिक्त स्थानों में उपयुक्त विशेषण भरिए।**

**(1x3=3)**

(क) समुद्र में \_\_\_\_\_ लहरे उठ रही थीं।

(ख) \_\_\_\_\_ बच्चे शीशा तोड़ कर भाग गए।

(ग) \_\_\_\_\_ सड़क पर गाड़ी चलाना आसान होता है।

**प्रश्न 9. निम्नलिखित शब्दों के दो - दो पर्यायवाची शब्द लिखें।**

**(1x3=3)**

पहाड़, ईश्वर, बगीचा

**प्रश्न 10. निम्नलिखित शब्दों के अनेकार्थी शब्द लिखें।**

**(1x2=2)**

उत्तर, वर्ण

**प्रश्न 11. निम्नलिखित मुहावरों के अर्थ लिखकर वाक्यों में प्रयोग करें।**

**(2x2=4)**

दाल में काला, कान भरना

**प्रश्न 12. चाचा जी को उपहार के लिए धन्यवाद देते हुए पत्र लिखें।**

**(1x5=5)**

**अथवा**

**'शेर और चूहा' कहानी 70-80 शब्दों में लिखें।**



viii. ₹25.30 = \_\_\_\_\_ paise

- a) 253
- b) 25300

- c) 2530
- d) 250

ix. Fraction whose numerators are greater than the denominators are called \_\_\_\_\_ fractions.

- a) Proper fraction
- b) Improper fraction

- c) Mixed fraction
- d) None

x. ₹ 245.37 + ₹ 357.27

- a) ₹ 600.64
- b) ₹ 457.57

- c) ₹ 536.54
- d) ₹ 602.64

**Q.2 Solve the following questions:**

**(2 X 7= 14)**

i. Find the next to terms in the given pattern.

12, 15, 18, 21, \_\_\_\_\_, \_\_\_\_\_.

ii. Convert the following units.


(a) 420 minutes = \_\_\_\_\_ hours

(b) 5 hours 30 minutes = \_\_\_\_\_ minute

iii. 5 friend s bought a gift for ₹1845.50, how much did each of them contribute?

iv. Find two equivalent fractions of  $\frac{3}{5}$ .

v. Draw the other half of the following symmetrical shapes.



vi. Subtract: 10 hours 50 minutes from 12 hours 45 minutes

vii. Nisha bought 4 pairs of earrings, where each pair costs ₹45.50. How much change did she get back a home from ₹500 note?



**Q-3 Solve the following questions:****(3 X 4 = 12)**

- i. The recipe says that the cake must be baked for 2 hours and 15 minutes. Charu has been cooking it for 93 minutes . For how long does the cake need to be baked more?
- ii. A bicycle factory produces 1512 bicycles in a week. How many bicycles will it produce in 30 days?
- iii. Bony surveyed his classmates on their favourite outdoor activities and made a circle graph based on his survey. Use the circle graph to answer the following questions
  - A. What fraction of his classmates chose cycling?
  - B. What fraction of his classmates said that swimming was their favourite activity?
  - C. Which activity was least favourite among them?



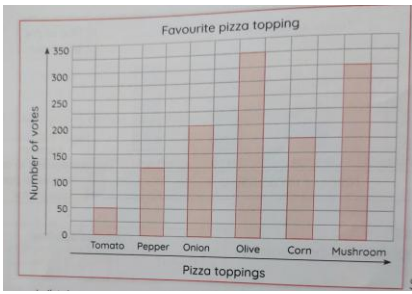
- iv. Anu had a box of 10 candies. She shared her candies with Joy. Joy ate  $\frac{5}{10}$  of Anu's candies. Anu ate  $\frac{4}{20}$  of the candies. Who ate less candies?

**Q-4 Mental Maths****(1 X 10= 10)**

- i. \_\_\_\_\_ is a repeated pattern or arrangement of 2-D shapes that can fill any 2-D space with no gaps or overlapping edges.
- ii. The time duration between 05:10 hours and 17:30 hours is \_\_\_\_\_.
- iii. \_\_\_\_\_ line is the line of symmetry between the two figures.
- iv. Compare: 5350 paise \_\_\_\_\_ ₹53.00
- v.  $42/6$  as whole numbers is \_\_\_\_\_.
- vi. Saira comes back from school at 2:15 \_\_\_\_\_ (am or pm).
- vii. The numerator of  $35/47$  is \_\_\_\_\_.
- viii. There are \_\_\_\_\_ months in one year.
- ix. Fractions in which numerators are greater than denominators are \_\_\_\_\_.
- x. ₹ 237.35 + ₹ 354.47 = \_\_\_\_\_

**Q-5 Case Based Question****(1 X 4= 4)**

Customers were asked about their favourite pizza toppings. Look at the bar graph and answer.



- (a) Which topping is liked most by the customers?
- (b) Which topping is liked least by the customers?
- (c) How many customers have chosen either tomato or mushroom toppings?
- (d) How many people voted in all?

**St. PBN PUBLIC SCHOOL, GURUGRAM**

**UNIT TEST-IV**

**CLASS-IV**

**SUBJECT-EVS (SAMPLE PAPER )**

NAME: \_\_\_\_\_

Time: 2 hours.

MM-40.

**GENERAL INSTRUCTIONS:**

- 1. Read all the questions carefully before attempting.**
- 2. All questions are compulsory.**
- 3. Do as directed.**

**1. Choose the correct option and write in your answer sheet:**

**(1x5=5)**

1. This monuments was built by Mauryan emperor Ashoka.

- a) The great stupa.      b) The Sindhu Durg fort  
c) The Victoria memorial.      d) Hawa Mahal

2. What should you do in case of accident?

- a) panic.      b) surround the injured  
c) call for a doctor.      d) Tighten the person's clothes

3. Who among these works with stones and bricks?

- a) Welders.      b) plumbers  
c) masons.      d) architect

4. In which direction does the sun rise?

- a) north.      b) south  
C) East.      d) West

5. Which of these run both over and under the ground?

- a) Metro.      b) Bus

c) Ferris

d) Cruises

**Q2. Fill in the blanks: -**

**(1X5=5)**

- a) The different vehicle that we use for travel in our known as\_\_\_\_\_.
- b) \_\_\_\_\_ is a special picture of what is on the ground in real life.
- c) A mixture of cement , sand and \_\_\_\_\_ is called concrete.
- d) A protective hat that we wear to say while riding a bicycle.
- e) \_\_\_\_\_ is a set of symbol through which a language is written down is

**Q3. State True or False.**

**(1x5 =5)**

- a) India's national languages Hindi.
- b) We can stay safe by following safety rules.
- c) Radio was invented by Alexander Graham Bell.
- d) A book of map is called Atlas.
- e) A compass looks like watch but is not one.

**Q4. Answer the following questions in brief:**

**(2x5=10)**

- a) Describe briefly the role of an architect and civil engineer in building houses.
- b) Distinguish between passenger ships and cargo ships
- c) How is the map of neighbourhood different from the map of a country?
- d) List any two ways that you can stay safe on the road.
- e) Distinguish between natural and cultural heritage.

**Q5. Answer the following questions in detail:**

**(3X3=9)**

- a) Define a first aid ? Name some of the things we should have in our first aid kit .
- b) Draw a mind map to describe modes of transport.
- c). Draw legends for the following:

International boundary, state boundary ,National Highway, major roads , state capital , other town.

- d) People often scribble their names and make other marks on the walls of the monuments why is it a wrong thing to do how can we stop people from doing this?

### Q7. Case-Based Study Question: First Aid Kit

In Rahul's school, every classroom has a first aid kit. One day, Rahul was playing in the park when he fell and got a small cut on his knee. His teacher quickly took out the first aid kit, cleaned the wound, and put a bandage on it. Rahul felt better and continued his day.

Now, answer the following questions:

1. What is a first aid kit used for?

- a) Playing games
- b) Treating small injuries quickly
- c) Doing homework
- d) Cooking food

2. What should be used to clean a small wound?

- a) Water and antiseptic
- b) Chocolate
- c) Pencil
- d) Paint

3. What do we use to cover a wound?

- a) Bandage
- b) Balloon
- c) Toy
- d) Notebook

4. Where should a first aid kit be kept?

- a) In a safe and easy-to-reach place
- b) In the dustbin
- c) Under heavy books
- d) In a locked cupboard that no one can open

5. What should you do if someone is badly hurt?

- a) Ignore them
- b) Call a teacher or an adult for help

c) Run away

d) Give them a toy

**ST. PBN PUBLIC SCHOOL, GURUGRAM**  
**UNIT TEST - IV**  
**CLASS-IV**  
**SUBJECT- COMPUTER**  
**Sample Paper**

Time: 2 Hours

MM: 40

NAME: \_\_\_\_\_

ROLL NO: \_\_\_\_\_

**General Instructions:**

1. All questions are compulsory.
2. Read each question carefully.

**1. Tick the correct answer.**

**(1×5=5)**

1) Which of the following is a presentation software?

- (a) Microsoft Word    (b) Microsoft PowerPoint    (c) Paint**

2) A website address is called a \_\_\_\_\_.

- (a) URL                      (b) File                      (c) Folder**

3) Which tool is used to apply background colors and designs in PowerPoint?

- (a) Design Tab   (b) Slide Show Tab   (c) Home Tab**

4) Which of these is an Internet browser?

- (a) Notepad              (b) Google Chrome              (c) Calculator**

5) What is used to connect a computer to the Internet?

- (a) Mouse              (b) Modem              (c) Speaker**

**2. Fill in the blanks-**

**(1×5=5)**

- 1) The first slide in a PowerPoint presentation is called the \_\_\_\_\_ slide.
- 2) To add a picture in a slide, we use the \_\_\_\_\_ tab in PowerPoint.
- 3) Google Chrome and Mozilla Firefox are examples of \_\_\_\_\_
- 4) A \_\_\_\_\_ is a collection of slides in PowerPoint.
- 5) To add a picture in a slide, we use the \_\_\_\_\_ tab in PowerPoint.

**3. State True or False:** **(1×5=5)**

1. Internet helps in online learning and research
2. PowerPoint does not support inserting audio files.
3. A slide show can be played without a computer.
4. The outline tab is used to set the desired layout of the active slide.
5. To close powerpoint application, click on the file tab> close option.

**4. Answer in one word or sentence.**

1. Write the shortcut key for the following function- **(2)**
  - a. To run the slide show
  - b. To save your presentation.
  - c. To insert new slide
  - d. To open Powerpoint file
2. Write the full form of following- **(3)**
  - a. WWW
  - b. MODEM
  - c. ARPANET

**5. Answer the following ( Do any 5 questions)** **(2×5=10)**

1. What is Microsoft PowerPoint? Name any two features of PowerPoint.
2. What is a browser? Name any two browsers.
3. Write any two advantages of using the Internet.
4. Define the term placeholder.
5. What do you understand by term slide show?
6. What is a search engine? Give one example.

**6. Difference between:** **(2×2=4)**

1. Presentation and Slide.
2. Internet and Network.

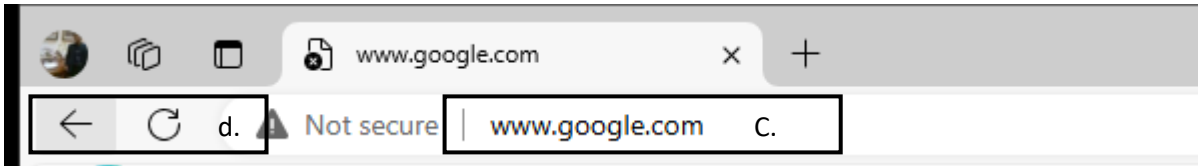
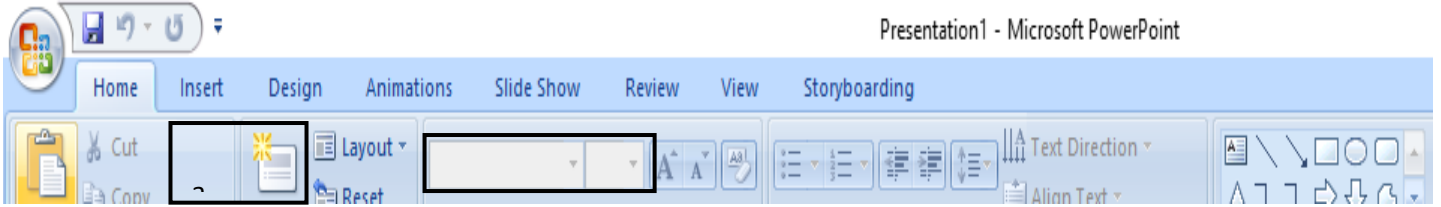
**7. Competency based question:** **(1×2=2)**

1. Amit is making a school project on "Wild Animals." He wants to add some pictures in slides. What option should he use?
2. Ritika wants to download some pictures from internet. Which program should she use to do the same?

**8. Case study based questions:** **(1×4=4)**

- a. Write the use of bordered options–





b.