

**ST. PBN PUBLIC SCHOOL, GURUGRAM**  
**UNIT TEST-IV**  
**CLASS – II**  
**ENGLISH**  
**SAMPLE PAPER**

**TIME: 2 Hours**

**MM: 40**

**NAME:** \_\_\_\_\_

**ROLL NO:** \_\_\_\_\_

**GENERAL INSTRUCTIONS:**

1. All questions are compulsory.
2. Read each question carefully.

**Section (A) [Comprehension]**

**Q1 Read the unseen passage and answer the questions.**

**(5)**

**MY NEW PET**

My dad bought me a new pet. He is a cute little dog. He is sleepy, as he is little now.

My dad and mom help me to keep the dog clean. We have a doghouse where he stays, I play with him in the evening when I come home from school.

He is growing quickly. I love my new pet.

a) What is my new pet? **(1)**

---

---

b) Why is he sleepy? **(1)**

---

---

---

c) Who helps me keep the dog clean? **(1)**

---

---

d) Where does my pet stays? **(1)**

---

e) What do I do when I come home? **(1)**

---

**Section –B (Reader)**

**Q2) Fill in the blanks.**

**(0.5x6=3)**

- a) \_\_\_\_\_ can't be seen in an X-ray scan.
- b) Arun's hospital room was full of \_\_\_\_\_.
- c) \_\_\_\_\_ only took two minutes.
- d) The child is muttering \_\_\_\_\_ under his breath.
- e) The \_\_\_\_\_ are playing Kabaddi.
- f) Turn around and run when you \_\_\_\_\_ the other team.

**Q3) Write the meaning of the following words.**

**(0.5x4=2)**

a) star

\_\_\_\_\_

b) wrist

\_\_\_\_\_

c) cheered

\_\_\_\_\_

d) scream

\_\_\_\_\_

**Q4) Answer the following questions.**

**(1x4=4)**

a) Which part of his body had Arun injured?

\_\_\_\_\_  
\_\_\_\_\_

b) What game did Arun play?

\_\_\_\_\_  
\_\_\_\_\_

c) Why do you think the poet repeats the word Kabaddi in the poem?

\_\_\_\_\_  
\_\_\_\_\_

d) What game are the children playing?

\_\_\_\_\_  
\_\_\_\_\_

**Q5) Make sentences.**

**(0.5x2=1)**

a) Sad- \_\_\_\_\_

b) Name- \_\_\_\_\_

**Section- C**

**Q6) Fill in the blanks with always, often, sometimes, usually, never. (1x4=4)**

a) The sun \_\_\_\_\_ rises in the north.

b) Little babies \_\_\_\_\_ don't have hair.

c) I \_\_\_\_\_ go for morning walks, but my brother \_\_\_\_\_ comes with me.

**Q7) Fill in the blanks with the correct form of the verb, based on now and then.**

**(1x4=4)**

a) Tia \_\_\_\_\_ to the park yesterday. (go)

b) Tanu \_\_\_\_\_ carefully. (drive)

c) Meera will \_\_\_\_\_ healthy food from this Tuesday. (eat)

d) I \_\_\_\_\_ for three hours last weekend. (swim)

**Q8) Fill in the blanks with will/will not.**

**(1x4=4)**

a) I love beaches. I \_\_\_\_\_ go to Goa.

b) He said sorry that it \_\_\_\_\_ be repeated again.

c) Her oven just got damaged, she \_\_\_\_\_ bake the cake for us.

d) Sham \_\_\_\_\_ go to his best friend's birthday party.

**Q9) Write the short forms of the words in bold.**

**(1x4=4)**

a) You **do not** like to eat vegetables?

\_\_\_\_\_

b) We **were not** happy last year.

\_\_\_\_\_

c) **She is** our Principal Ma'am.

\_\_\_\_\_

d) They **did not** allow us food inside the theatre.

\_\_\_\_\_

**Q10) Fill in the blanks with the position words.**

**(1x4=4)**



सेंट पी बी एन पब्लिक स्कूल  
इकाई परीक्षा IV  
कक्षा दूसरी  
विषय : हिंदी  
SAMPLE PAPER

समय 2 घंटे

अंक 40

NAME: \_\_\_\_\_

ROLL NO \_\_\_\_\_

सामान्य निर्देश :

- 1 सभी प्रश्नों के उत्तर देना अनिवार्य है।
- 2 लेख और वर्तनी का ध्यान रखें।
- 3 प्रश्नों को ध्यान से पढ़कर उत्तर दीजिए।

भाग - क  
साहित्य

**प्रश्न 1. निम्नलिखित गद्यांश को पढ़कर प्रश्नों के सही विकल्प चुनकर उत्तर दीजिए।**

**(1x5=5)**

रीमा और रोहन अपने परिवार के साथ गरमियों की छुट्टियों में नैनीताल गए। वे वहाँ एक होटल में ठहरे। होटल एक पहाड़ी की चोटी पर था। वहाँ से नैनी झील और चारों ओर की हरयाली दिखाई देते थी। झील में अनेक नावें तैर रही थी। झील के पास के मैदान में तरह - तरह की दुकानें थीं। कोई कपड़े खरीद रहा था, कोई खिलौने, कोई लकड़ी से बना सामान तो कोई खाने - पीने में मस्त था। वे वहाँ दस दिन रह कर वापस दिल्ली आ गए।

(i) रोहन किसके साथ नैनीताल गया था ?

(क) अपने मित्रों के साथ

(ख) अपने परिवार के साथ

(ii) वे वहाँ कब गए थे ?

(क) गरमियों में

(ख) गरमियों की छुट्टियों में

(iii) उनका होटल कहाँ था ?

(क) पहाड़ी की चोटी पर

(ख) झील के पास

(iv) झील में क्या दिखाई दे रहा था ?

(क) हरियाली

(ख) नावें

(v) वे कितने दिन बाद वापस आए ?

(क) दस दिन बाद

(ख) पंद्रह दिन बाद

**प्रश्न 2. सही वाक्यों पर सही (✓) तथा गलत वाक्य पर गलत (X) का निशान लगाइए ।**  
**(0.5x4=2)**

- (i) गरमी में फूल खिल उठते हैं । ( )
- (ii) महात्मा जी के कलश में शरबत था । ( )
- (iii) गाँव के लोग महात्मा जी का आदर करते थे । ( )
- (iv) हर साल मेले में जंगली जानवर आते थे । ( )

**प्रश्न 3. दिए गए शब्दों की सहायता से रिक्त स्थान भरिए ।** **(0.5x5=2.5)**

- (i) \_\_\_\_\_ में पतझड़ आता है ।
- (ii) गरमी बड़ी \_\_\_\_\_ होती है ।
- (iii) गलती की है तो \_\_\_\_\_ माँग लो ।
- (iv) बारिश न होने से \_\_\_\_\_ चौपट हो गई ।
- (v) चाँद पर \_\_\_\_\_ व गड्डे हैं ।

**प्रश्न 4. निम्नलिखित शब्दों के अर्थ लिखिए ।** **(0.5x5=2.5)**

- (i) सत्यानाश - \_\_\_\_\_
- (ii) लगातार - \_\_\_\_\_
- (iii) खज़ाना - \_\_\_\_\_
- (iv) कारण - \_\_\_\_\_
- (v) कृपा - \_\_\_\_\_

**प्रश्न 5. निम्नलिखित प्रश्नों के उत्तर एक वाक्य में लिखिए।**

**(0.5x4=2)**

(i) महात्मा जी के खेतों पर क्या कृपा थी ?

---

(ii) जंगल की सुंदरता किस मौसम में चली जाती हैं ?

---

(iii) चाँद धरती के चक्कर कितने दिन में पूरा करता है ?

---

(iv) घास खाकर पेट भर जाने पर खरगोश ने क्या किया ?

---

**प्रश्न 6. निम्नलिखित प्रश्नों के उत्तर लिखिए।**

**(2 x 3 = 6)**

(i) अपनी मंजिल को कोन प्राप्त कर पता है ?

---

---

(ii) चाँद पर सबसे पहले कोन पहुँचा ?

---

---

(iii) धरती को गरमी और रोशनी कहाँ से मिलती है ?

---

---

भाग - ख  
व्याकरण

प्रश्न 7. महीनों के नाम लिखें।

(0.5x12=6)

i) \_\_\_\_\_

vi) \_\_\_\_\_

ii) \_\_\_\_\_

vii) \_\_\_\_\_

iii) \_\_\_\_\_

viii) \_\_\_\_\_

iv) \_\_\_\_\_

ix) \_\_\_\_\_

v) \_\_\_\_\_

x) \_\_\_\_\_

प्रश्न 8. समान अर्थ वाले एक - एक शब्द लिखें।

(1x5=5)

i) रात - \_\_\_\_\_

ii) आँख - \_\_\_\_\_

iii) बाग - \_\_\_\_\_

iv) पेड़ - \_\_\_\_\_

v) चाँद - \_\_\_\_\_

प्रश्न 9. नीचे दिए गए पर्यायवाची शब्दों में से जो गलत हैं उस पर गोला लगाइए। (1x4=4)

i) पानी - जल, वृक्ष, नीर

ii) जमीन - नेत्र, धरती, धरा

iii) सूरज - सूर्य, भानू, सर्प

iv) आग - आकाश, अग्नि, अनल



प्रश्न 10. अंगूर खट्टे हैं कहानी पाँच वाक्यों में लिखिए ।

(1x5=5)

---

---

---

---

---

---

---

---

---

---

**St. PBN PUBLIC SCHOOL, GURUGRAM**  
**UNIT TEST – IV**  
**CLASS – II**  
**MATHEMATICS**  
**SAMPLE PAPER**

**TIME: 2 Hours**

**MM-50**

**GENERAL INSTRUCTIONS:**

1. All questions are compulsory.
2. Read each question carefully.

**NAME:** \_\_\_\_\_

**ROLL NO:** \_\_\_\_\_

**1. Tick the correct answer.**

**(1x10=10)**

(i) 7 groups of 3=

(a) 21

(b) 10

(ii) Which of the following is the lowest value of Indian currency?

(a) ₹1

(b) ₹5

(iii) The number 10 less than 56.

(a) 46

(b) 6

(iv)  $81 \div 9 =$

(a) 7

(b) 9

(v) \_\_\_\_\_ is the purpose of data handling.

(a) To organize and understand information

(b) To sing songs

(vi) What is division?

(a) Multiplying numbers

(b) Sharing or grouping equally

(vii)  $₹43 - ₹20 =$

(a) 43

(b) 23

(viii) If a pictograph shows 1 star (★) for 2 students, how many students do ★ ★ represent?

(a) 2

(b) 4

(ix)  $45 \times 0 =$  \_\_\_\_\_

(a) 21

(b) 0

(x) A non leap year has \_\_\_\_\_ days

(a) 366

(b) 365

**2. Solve the following as instructed.**

**(2x8=16)**

(i) Rohan went to a shop with ₹50. He bought a pencil for ₹18. How much money is left with him?

(ii) Subtract ₹602 from ₹982

(iii) Divide (by repeated subtraction)

$$24 \div 8$$

(iv) Write in columns and add.

( a )  $256 + 341 + 209 + 503$

(v) If #=2 caps, then how many caps will be represented by #####?

(vi) Multiply:

	H	T	O
	1	2	4
	x		8
	<hr/>		

(vii) Divide:

$$452 \div 2$$

(viii) Fill in the blanks.

(a)  $67 - \underline{\hspace{2cm}} = 30$

(b)  $10 \times 100 = \underline{\hspace{2cm}}$

**3. State True or False.**

**(1x4=4)**

(i) 400 paisa make 4 rupee

\_\_\_\_\_

(ii)  $600 + 100 = 1000$

\_\_\_\_\_

(iii)  $\text{₹}65 - \text{₹}10 = \text{₹}55$

\_\_\_\_\_

(iv)  $568 \div 8 = 71$

\_\_\_\_\_

**4. Solve the following questions**

**(2x3=6)**

(i) Asha has 42 stickers in her collections. She buys 18 more stickers. How many stickers does Asha have now?

---

(ii) Rita has 18 balloons. She wants to divide them equally among 6 friends. How many balloons will each friend get?

(iii) A fruit seller had 45 apples in the morning. By the afternoon, he sold 28 apples. How many apples are left with the fruit seller?

**5. Dodging of tables.**

**(1x5=5)**

(i)  $5 \times 9 = \underline{\hspace{2cm}}$ .

(ii)  $7 \times 7 = \underline{\hspace{2cm}}$ .

(iii)  $5 \times 2 = \underline{\hspace{2cm}}$ .

(iv)  $4 \times 10 = \underline{\hspace{2cm}}$ .

(v)  $5 \times 10 = \underline{\hspace{2cm}}$ .

**6. Fill in the blanks.**

**(1x5=5)**

(i)  $\text{₹}400 + \text{₹}300 = \text{₹} \underline{\hspace{2cm}}$

(ii) If  $200 + 32 = 232$  then  $232 - 32 = \underline{\hspace{2cm}}$ .





(iii)  $\text{₹}20.0 + \text{₹}40 = \underline{\hspace{2cm}}$

(iv)  $11 \times 2 = 2 \times 11 =$  \_\_\_\_\_

(v) ₹60 more than ₹20 is \_\_\_\_\_

### 7. Case Study:

Use the pictograph to answer the questions below.  
The graph shows how many apples each child picked.

Hannah	
Peter	
Mary	
Andrew	

1. Who picked the most apples?

2. Who picked the list amount of apples?

3. How many more apples did Hannah pick than Andrew?

4. How many apples were picked in all?

**St. PBN PUBLIC SCHOOL, GURUGRAM**  
**UNIT TEST-IV**  
**Class - II**  
**EVS**  
**SAMPLE PAPER**

MM-40

Time:2 hour

General Instructions

1. All questions are compulsory.
2. Read each question and option carefully and choose the best option.
3. Allotted marks are indicated against each question in terms of points.

Name\_\_\_\_\_

Class\_\_\_\_\_

Roll no.\_\_\_\_\_

Date\_\_\_\_\_

Q.I Fill in the blanks:

(1X5=5)

1. When we \_\_\_\_\_, we need directions to find our way.
2. We return from school in the \_\_\_\_\_.
3. Simple direction help us to find out the \_\_\_\_\_.
4. We feel \_\_\_\_\_ during the winter season.
5. \_\_\_\_\_ are plain which are covered with sand.

Q.II Tick the correct answers:

(1x10=10)

1.some places have flat land called

- |           |          |
|-----------|----------|
| a) valley | c) peak  |
| b) hills  | d) plain |

2. Peak is mostly covered with

- |          |          |
|----------|----------|
| a) sand  | c) snow  |
| b) water | d) grass |

3. Leaves fall during which season

- |           |           |
|-----------|-----------|
| a) autumn | c) rainy  |
| b) winter | d) spring |

4. In which season we wear warm clothes

- |            |           |
|------------|-----------|
| a) monsoon | c) winter |
|------------|-----------|



b) autumn

d) summer

5. The clock face shows how many hours

a) 24 hours

b) 12 hours

c) 6 hours

d) 3 hours

6. Sun always rises in the

a) east

b) west

c) north

d) south

7. There are \_\_\_\_\_ seconds in one minute.

a) 72

b) 60

c) 25

d) 36

8. In which season sky is filled with dark clouds.

a) summer

b) Winter

c) Spring

d) Autumn

9. In which season trees shed their leaves

a) Monsoon

b) Winter

c) Spring

d) Autumn

10. Highlands having flat tops.

a) hill

b) desert

c) plateaus

d) land

Q.III. Write true or false:

(1x5=5)

1. We wear gum boots in summer season

\_\_\_\_\_

2. Air is all around us.

\_\_\_\_\_

3. March has 31 days.

\_\_\_\_\_

4. A year has 12 months

\_\_\_\_\_

5. There are seven seasons in India

\_\_\_\_\_

Q.VI. Answer the following questions:

(2x4=8)

Q.1 What are symbols?

Ans \_\_\_\_\_

\_\_\_\_\_

\_\_\_\_\_

Q.2 Write the names of the days of the week.

Ans \_\_\_\_\_

---

---

Q.3 What is weather? What type of weather is there in summer season?

Ans \_\_\_\_\_

---

---

Q.4 What are deserts?

Ans \_\_\_\_\_

---

---

---

Q.V Match the following:

(4x1=4)

- |                     |            |
|---------------------|------------|
| a) South            | Summer     |
| b) Air conditioners | Plains     |
| c) Minutes          | Direction  |
| d) Flat lands       | 60 Seconds |

Q.VI. With the help of given pictures. Answer the following.

(4x1=4)

1.



The sun always set in

---

---

---

2.



how many colours are there in rainbow?

---

---

---

3.



What is the time in clock?

---

4.



Given symbol is used for \_\_\_\_\_

Q.VII Case study question: -

Amit and Riya were playing in the park when Amit saw a beautiful butterfly flying toward the east. He wanted to follow it, but Riya said, "Let's first find out where east is!" They looked around and saw the sun setting in the west. Riya remembered that the sun rises in the east and sets in the west. They turned to the opposite side of the sunset and found the east! Now, they could follow the butterfly in the right direction.

Questions:

1. In which direction does the sun rise?

---

---

2. If you are facing west, which direction will be behind you?

---

---

3. How did Amit and Riya find out where east was?

---

---

4. What helps us know directions when we are outside

---

---



d) The \_\_\_\_\_ block plays a pop sound.

e) There are \_\_\_\_\_ blocks in ScratchJr.

**3. State the following statements as True or False-**

**(1x5=5)**

- a. The pencil tool is used to draw circle. \_\_\_\_\_
- b. The looks blocks are used to change appearance of a sprite. \_\_\_\_\_
- c. There are ten types of arrows in the shape group. \_\_\_\_\_
- d. The control blocks are orange in colour. \_\_\_\_\_
- e. You can select brush from brushes tool. \_\_\_\_\_

**4. Answer the following questions in one word:**

**(1x4=4)**

a) Which tool is used to pick a colour from an area of the picture?

\_\_\_\_\_

b) Which block is used to insert sounds in to the project?

\_\_\_\_\_

c) Which block can you use to make sprite disappear from the stage?

\_\_\_\_\_

d) Which tool contains a set of different kinds of brushes?

\_\_\_\_\_


**5. Name the tool used to make following pictures-**

**(1x2=2)**

1.



\_\_\_\_\_



2. \_\_\_\_\_

5. Case study based questions- (1X4=4)

a. Identify and write the name of following-

1.  \_\_\_\_\_

2.  \_\_\_\_\_

3.  \_\_\_\_\_

4.  \_\_\_\_\_