

**St. PBN PUBLIC SCHOOL**  
**UNIT TEST - I**  
**CLASS - I**  
**MATHEMATICS**  
**SAMPLE PAPER**

**Time: 2 Hours**

**MM-50**

**General Instructions:**


1. All questions are compulsory.
2. Read each question carefully.

**NAME** \_\_\_\_\_ **ROLL NO** \_\_\_\_\_

**I. TICK THE CORRECT OPTION.**

**(1x10=10)**

1. Choose the bigger cloud.



2. Choose the smaller sun.




a)


b)

3. Which of the following figures has more dots?

(a)



(b)



4. Which number is smaller?

- a) 15
- b) 12

5. The number 7 is read as:

- a) Seven
- b) Six

6. Choose the correct  +  +  =

- a) 3
- b) 5

7. Apple is on \_\_\_\_\_ position:



- a) Third
- b) First

8. Choose the correct option:



- a)  $3+1=4$
- b)  $0+3=3$

9. What comes after 9?

- a) 8
- b) 10

10. \_\_\_\_\_ is sitting above the table.



- a) Cat
- b) Dog

**II. Write the answers as instructed.**

1. Write the number names of the following:

4

- (a)  $17 =$  \_\_\_\_\_
- (b)  $5 =$  \_\_\_\_\_
- (c)  $19 =$  \_\_\_\_\_
- (d)  $11 =$  \_\_\_\_\_

2. Write the missing numbers

2

- (i) 44, \_\_\_\_\_, 46, \_\_\_\_\_, 48, 49.
- (ii) 2, \_\_\_\_\_, 6, \_\_\_\_\_, 10.

3. Shade the second bird:

1



III. Complete the table.

3

a)  $2 \times 3 =$  \_\_\_\_\_


b)  $2 \times 7 =$  \_\_\_\_\_

c)  $2 \times 9 =$  \_\_\_\_\_

IV. Match the following.

( $1 \times 5 = 5$ )

(i) ● ● ●



(ii) Circle

3

(iii)  $5 + 3$

17

(iv) 18 comes after

6 and 8

(v) 7 comes between

8


V. Solve the following questions:


( $2 \times 5 = 10$ )

1. Complete the following.

10, \_\_\_\_, 8, \_\_\_\_, 6, \_\_\_\_ 4, \_\_\_\_, 2, 1

2. How many sides are there in :

a)  = \_\_\_\_\_

b)  = \_\_\_\_\_

3. State True or False:

a) A square has two corners. \_\_\_\_\_

b) A circle has no sides. \_\_\_\_\_

4. Arrange the given numbers from smaller to bigger:

a) 17, 10, 12 \_\_\_\_\_

b) 3, 18, 15 \_\_\_\_\_

5. Fill in the blank <, > or = :

a) 20 \_\_\_\_\_ 20

b) 8 \_\_\_\_\_ 14

**VI. Solve the following questions:**

(2x3=6)

3. Reema got 6 gifts on her birthday. Her grandmother gave 3 more gifts. How many gifts she get in all?

Ans. \_\_\_\_\_ + \_\_\_\_\_ = \_\_\_\_\_ gifts

4. Mahi bought 6 bananas and 5 oranges .How many total fruits does she have?

Ans- No. of bananas = \_\_\_\_\_ No. of oranges = \_\_\_\_\_

\_\_\_\_\_

Total no. of fruits = \_\_\_\_\_

5. I have four sides, but not all of them are equal. My opposite sides are equal. You might see me in a door or a book

Ans: (i) Who am I \_\_\_\_\_

(ii) I have \_\_\_\_\_ sides.


## VII. Fill in the blanks-

(1X5=5)

a)  $10 - 1 =$  \_\_\_\_\_

b)  $2 \times 2 =$  \_\_\_\_\_.

c) \_\_\_\_\_ just comes after 5.

d)  = \_\_\_\_\_ (UROF)

e)  +  = \_\_\_\_\_

### Q8: Case based question:

( 1x4=4)

Bobby's mother wants to prepare a fruit salad. So she told Bobby to collect fruits from the garden. Bobby collected 2 Guavas, 3 Oranges, 3 Apples and 1 Watermelon from the garden.

(i) Which two fruits Bobby collected in equal numbers?

\_\_\_\_\_

(ii) Which fruit is collected in least number?

\_\_\_\_\_

(iii) How many guavas were collected by Bobby?

\_\_\_\_\_

(iv) How many fruits does bobby have in all?

\_\_\_\_\_

सेंट. पी. बी. एन. पब्लिक स्कूल  
इकाई परीक्षा।  
कक्षा : पहली  
विषय : हिंदी  
Sample Paper

समय : 2 घंटे

अंक : 40


NAME: \_\_\_\_\_ ROLL NO \_\_\_\_\_

सामान्य निर्देश :

1. सभी प्रश्नों के उत्तर देना अनिवार्य है।
2. लेख और वर्तनी का ध्यान रखें।
3. प्रश्नों को ध्यान से पढ़कर उत्तर दीजिए।

प्रश्न 1. चित्र देखकर पहला वर्ण लिखिए।


(1x4=4)



(i) \_\_\_\_\_



(ii) \_\_\_\_\_



(iii) \_\_\_\_\_



(iv) \_\_\_\_\_



(v) \_\_\_\_\_

प्रश्न 2. बिना मात्रा के पाँच शब्द लिखिए।


(1x5=5)

(क) \_\_\_\_\_

(ख) \_\_\_\_\_







(i) डम\_\_



(ii) आ\_\_\_\_



(iii) \_\_\_\_रज



(iv) \_\_\_\_हा



(v) क \_\_\_\_ तर

**प्रश्न 8. पाँच फलों के नाम लिखिए।**

**(1x5=5)**

(क) \_\_\_\_\_

(ख) \_\_\_\_\_

(ग) \_\_\_\_\_

(घ) \_\_\_\_\_

(ङ) \_\_\_\_\_

(च) \_\_\_\_\_

**St. PBN PUBLIC SCHOOL**  
**UNIT TEST-I**  
**CLASS - I**  
**EVS**  
**SAMPLE PAPER**

**Time: 2 Hours**

**MM-50**

**General Instructions**

**1. All questions are compulsory.**

**2. Read each question carefully.**

**NAME:** \_\_\_\_\_ **ROLLNO:** \_\_\_\_\_

**1. Tick the correct option.**

**(1x10=10)**

(i) Parents of our parents are our \_\_\_\_\_

a) cousins

b) grandparents

(ii) We frown when we are \_\_\_\_\_.

a) angry

b) happy

(iii) The house made of mud, dry leaves, bamboo and straw is called \_\_\_\_\_.

a) pucca house

b) kutcha house

(iv) We take rest in our \_\_\_\_\_.

a) bedroom

b) kitchen

(v) All members of a family have a common \_\_\_\_\_

a) nick name

b) family name

(vi) Topmost part of our body is \_\_\_\_\_.

a) head

b) eyes

(vii) Family in which one or more children live with their parents is a \_\_\_\_\_.

a) Nuclear family

b) Joint family

(viii) Minnie loves to visit her grandparents during \_\_\_\_\_ vacations.

a) summer

b) winter

(ix) We use \_\_\_\_\_ for boys.

a) She

b) He

(x) We carry our school bag on our\_\_\_\_\_.

a) shoulders

b) waist

**2. Answer the following questions.**

**(2x3=6)**

(i) Name two activities you can do with your family.

---

---

(ii) Write two lines about yourself.

---

---

(iii) Name the type of houses.

---

---

**3. Match the following:**

**(1x5=5)**

(i) Mother and Father

(a) Holidays

(ii) Vacations

(b) Parents

(iii) Mountains

(c) Sloping roofs

(iv) Not happy

(iv) Kitchen

(v) Cooking

(v) Sad

**4. Complete the word:**

**(1x5=5)**

a) S\_\_oulde \_\_

b) Ne\_\_k

c) M\_\_u \_\_ h

d) He\_\_d

e) Fi\_\_ge \_\_s

**5. State 'True' or 'False':**

**(1x5=5)**

a) Skin is the organ that covers our body.

---

b) Minnie has a pet named Bonny.

---

c) The eyes are protected by eyelids.

---

d) All of us should keep our house dirty. \_\_\_\_\_

e) We take bath in the bedroom. \_\_\_\_\_

**6. Name the following:**

**(1x5=5)**

a) We sit and relax with our guests in this room. \_\_\_\_\_

b) Uncle's son is known as \_\_\_\_\_

c) The parts of your body that you use to jump \_\_\_\_\_

d) Things that we like to do in our free time for fun is called \_\_\_\_\_

e) A \_\_\_\_\_ is a group of people who live together.

**7. Case based questions:**

**(1x4=4)**

Rommy ran to the window and saw the sky covered with dark clouds. Soon, the rain started falling. It rained heavily for a while and then the sun smiled from behind the clouds. Rommy came out in the courtyard and felt the cool air on his face. Standing there, he could smell the freshly made pakoras that Grandma was making in the kitchen.

1. Which sense organ helped Rommy see dark sky and rain?

\_\_\_\_\_


2. Name the sense organ that helped Rommy feel the cool air?

\_\_\_\_\_

3. Which sense organ organ helped Rommy to smell Pakoras?

\_\_\_\_\_

4. Draw any one sense organ of your choice.





**St. PBN Public School, Gurugram**  
**Unit Test- I**  
**Class - I**  
**Subject – Computer**  
**Sample Paper**

**TIME: 2 Hours**

**MM: 20**

**GENERAL INSTRUCTIONS:**

1. All questions are compulsory.
2. Read each question carefully.

**NAME:** \_\_\_\_\_

**ROLL NO:** \_\_\_\_\_

**1. Tick the correct answer.**

**(0.5x5=2.5)**

- a) A computer works very \_\_\_\_\_.  
i. Fast                                      ii. Slow                                      iii. Medium
- b) Robot helps us to do \_\_\_\_\_.  
i. Household work                      ii. Travelling                              iii. Shopping
- c) Computer is used to draw \_\_\_\_\_.  
i. Pictures                                      ii. Songs                                      iii. Movies
- d) \_\_\_\_\_ does not run on electricity.  
i. Washing Machine                      ii. Microwave                              iii. Clock
- e) A \_\_\_\_\_ is an example of AI.  
i. Robot                                      ii. Microwave                              iii. juicer

**2. Fill in the blanks:**

**(0.5x5=2.5)**

**(listen, Monitor, Data, Cooler, letters)**

- a) We can type \_\_\_\_\_ in computer.
- b) \_\_\_\_\_ looks like a TV screen.
- c) A computer helps to \_\_\_\_\_ songs.
- d) A computer never forgets \_\_\_\_\_.

e) \_\_\_\_\_ keeps our home cool.

**3. State whether the following statements are True or False (1x5=5)**

a) A Computer is a machine.

i. True

ii. False

b) Machines are manmade.

i. True

ii. False

c) We use refrigerator to keep veggies fresh.

i. True

ii. False

d) Computers are used to play games.

i. True

ii. False

e) Drone can help us to do household work.

i. True

ii. False

**4. Answer the following questions in one word:**

**(1x4=4)**

a) Which machine bakes cakes and cookies?

\_\_\_\_\_

b) Name the machine that is used to travel.

\_\_\_\_\_

c) Which machine is used to send and receive e-mails?

\_\_\_\_\_

d) Name any one place where we use computers.

\_\_\_\_\_

**5. Complete the names of machine-**

**(0.5x4=2)**

a) Mix\_\_\_\_\_r

b) F\_\_\_\_\_n

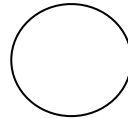

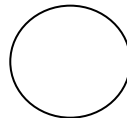
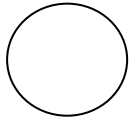
c) Toas\_\_\_\_\_er

d) Ale\_\_\_\_\_a

e) Tab\_\_\_\_\_et

**6. Case study based questions-**

**a. Identify and write (M) for machine and (N) for Not machine- (0.5x4=2)**



**b. Put a tick (✓) in the place where computers are used and cross (×) the other- (0.5x4=2)**

